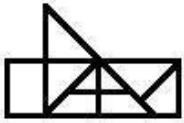


Combined Graduate Level Examination 2020

Q.1 How many triangles are there in the given figure?



- Ans 1. 11
 2. 13
 3. 10
 4. 12

Question ID : 81616113938

Status : Answered

Chosen Option : 1

Q.2 Select the option in which the words share the same relationship as that shared by the given pair of words.

Horses : Neigh

- Ans 1. Ducks : Quack
 2. Parrots : Bray
 3. Hares : Boom
 4. Pigs : Buzz

Question ID : 81616113318


Status : Answered

Chosen Option : 1

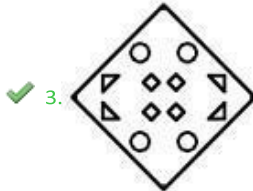
The sequence of folding a piece of paper and the manner in which the folded paper has been cut is shown in the following figures. How would this paper look when unfolded?




Q.3



Ans



✓ 3.



✗ 4.

Question ID : 81616113336

Status : Answered

Chosen Option : 3

Q.4 Four words have been given, out of which three are alike in some manner and one is different. Select the word that is different.

Ans ✗ 1. Intelligence

✓ 2. Weight

✗ 3. Aptitude

✗ 4. Memory

Question ID : 81616113922

Status : Answered

Chosen Option : 2

Q.5 Read the given statements and conclusions carefully. Assuming that the information given in the statements is true, even if it appears to be at variance with commonly known facts, decide which of the given conclusions logically follow(s) from the statements.

Statements:

All polygons are angles.

All angles are diagonals. All

cones are cubes.

All cubes are

decagons. No diagonal is a

cube.

Conclusions:

I. Some diagonals are polygons. II. All

diagonals are decagons.

III. No polygon is a cone.

IV. Some cubes are angles.

Ans 1. Both conclusions I and III follow

2. Both conclusions I and II follow

3. Only conclusion I follows

4. Both conclusions II and IV follow

Question ID : 81616113020

Status : Answered

Chosen Option : 1

Q.6 Select the correct combination of mathematical signs that can sequentially replace the * signs and balance the given equation.

$$42 * 7 * 64 * 11 * 6 * 4$$

Ans 1. $\div, -, +, \times,$
=

2. $\times, +, -, \div, =$

3. $\div, +, -, \times, =$

4. $\times, -, +, \div, =$

Question ID : 81616113935

Status : Answered

Chosen Option : 1

Q.7 Four number-pairs have been given, out of which three are alike in some manner and one is different. Select the number-pair that is different.

Ans 1. 14 : 210

2. 18 : 342

3. 17 : 307

4. 12 : 156

Question ID : 81616113932

Status : Answered

Chosen Option : 3

Q.8 Select the number from among the given options that can replace the question mark (?) in the following series.

24, 35, 51, 73, 102, ?

Ans 1. 149

2. 131

3. 151

4. 139

Question ID : 81616113829

Status : Answered

Chosen Option : 4

Q.9 In a certain code language, 'AROUND' is coded as '52182412144' and 'FIX' is coded as '63624'. How will 'PLASTIC' be coded in that language?

Ans 1. 1612261920183

2. 1612522021363

3. 1812521920383

4. 1612521920363

Question ID : 81616113926

Status : Answered

Chosen Option : 4

Q.10 Select the option that is related to the third word in the same way as the second word is related to the first word.

Depression : Mood :: Insomnia : ?

- Ans 1. Sleep
 2. Thinking
 3. Night
 4. Dreams

Question ID : 81616113822

Status : Answered

Chosen Option : 1

Q.11 Select the combination of letters that when sequentially placed in the blanks of the given series will complete the series.

L _UA_ Z_N_ AP_L_U_P

Z Ans 1. N, L, P, A, N,

U, Z

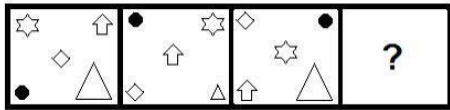
2. P, N, L, Z, U, A, N
 3. P, L, U, Z, N, A, N
 4. N, P, L, U, Z, N, A

Question ID : 81616113321

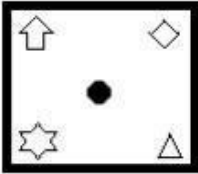
Status : Answered

Chosen Option : 4

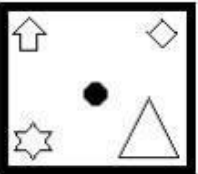
Q.12 Select the figure from among the given options that can replace the question mark (?) in the following series.



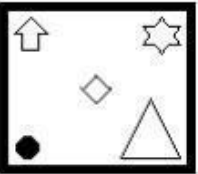
Ans




✓ 1.



✗ 2.



✗ 3.



✗ 4.


Question ID : 81616113836

Status : Not Answered


Chosen Option : --


Q.13 Select the correct option that indicates the arrangement of the given words in the order in which they appear in an English dictionary.

1. Freeze
2. Freedom
3. Fryer
4. Frozen
5. Fraud
6. Fringe

Ans  1. 5, 6, 2, 1, 4,
3

 2. 5, 2, 1, 6, 3, 4

 3. 5, 1, 2, 6, 4, 3

 4. 5, 2, 1, 6, 4, 3

Question ID : 81616113819

Status : Answered

Chosen Option : 4

Q.14 Out of the total number of players, $100/3\%$ are in hotel X and the remaining are in hotel Y. If 20 players from hotel Y are shifted to hotel X, then the number of players in hotel X becomes 50% of the total number of players. If 20 players from hotel X are shifted to hotel Y, then the number of players in hotel X becomes what per cent of the total number of players?

- Ans
- 1. 20.67%
 - 2. 16.67%
 - 3. 26.34%
 - 4. 12.75%

Question ID : 81616113330

Status : Answered

Chosen Option : 1

Q.15 Four letter-clusters have been given, out of which three are alike in some manner and one is different. Select the letter-cluster that is different.

- Ans
- 1. TPLH
 - 2. NJFA
 - 3. CYUQ
 - 4. FBXT

Select the correct mirror image of the given combination when the mirror is placed at 'PQ' as shown.

M y 7 O Q F j | ^P_Q

Question ID : 81616113820

Status : Answered

Chosen Option : 2

Q.16 

- Ans
- 1.

2. 
 3. 
 4. 

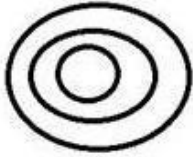
Question ID : 81616113335

Status : Answered

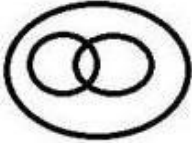
Chosen Option : 1

Select the Venn diagram that best illustrates the relationship among the following classes.


Q.17 Women, Researchers, Introverts




Ans 1.



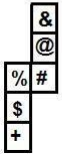
2.



3.



A cube is made by folding the given sheet. In the cube so formed, what would be the symbol on the opposite side of the # symbol?



Question ID :
81616113034

Status : Answered

Chosen Option : 4

Q.18

Ans

- 1. S
- 2. +
- 3. &
- 4. %

Question ID : 81616113939

Status : Answered

Chosen Option : 3

Q.19 Study the given pattern carefully and select the number that can replace the question mark (?) in it.

4 7 6
15 ? 21
44 68 60

- Ans 1. 19
 2. 20
 3. 18
 4. 24

Question ID : 81616113024

Status : Answered

Chosen Option : 4

Q.20 P, L, T, B, N and D are six members of a business family. N is the son of B, who is not the mother of N. L is the brother of B. D and B are a married couple. T is the daughter of D, who is the sister of P. How is N related to T?

- Ans 1. Sister
 2. Father
 3. Brother
 4. Mother

Question ID : 81616113322

Status : Not Answered

Chosen Option : --

Q.21 Select the letter-cluster from among the given options that can replace the question mark (?) in the following series.

PNNA, RPPE, TRRI, VTTO, ?

- Ans 1. YVVU
 2. XWWU
 3. XVVU
 4. YUUV

Question ID : 81616113313


Status : Answered


Chosen Option : 3

Q.22 In a certain code language, 'PERMIT' is written as 'VVLNOG'. How will 'INERTIA' be written in that language?

Ans  1. XYOHBCU

 2. OMYIZRU

 3. OHYXZCU

 4. XOYHCZU

Question ID : 81616113016

Status : Not Answered

Chosen Option : --

Q.1 Who among the following was elected as the President of Veterinary Council of India in January 2021?

- Ans
- 1. Rajeev Arora
 - 2. Dipankar Seth
 - 3. Umesh Sharma
 - 4. KK Verma

Question ID : 81616113361

Status : Not Answered

Chosen Option : --

Q.2 Which of the following statements about Swami Dayanand Saraswati is INCORRECT? Ans

- 1. He authored the book 'Satyarth Prakash'.
- 2. He was the founder of Arya Samaj.
- 3. His birthplace was Gujarat.
- 4. He was the founder of Brahma Samaj.

Question ID : 81616113957

Status : Answered

Chosen Option : 4

Q.3 Who among the following had written Kitab-ul-Hind that gave an incisive description of early 11th Century India?

- Ans
- 1. Al-Bukhari
 - 2. Al-Khwarizmi
 - 3. Al-Biruni
 - 4. Al-Kindi

Question ID : 81616113050

Status : Answered

Chosen Option : 3

Q.4 Which of the following is the application of sciences such as physics, chemistry, biology, computer science and engineering to matters of law and to the identification of various facts of civilian investigation?

Ans  1. Psychology

 2. Morphology

 3. Forensic science

 4. Kalology

Question ID : 81616113039

Status : Answered

Chosen Option : 3

Q.5 As per the Union Budget of 2021-22, how many regional national institutes of virology will be set up?

- Ans 1. Six
 2. Two
 3. Three
 4. Four

Question ID : 81616113947

Status : Not Answered

Chosen Option : --

Q.6 In Leh, the first ever ice climbing festival was celebrated in _____ alley in January 2021.

- Ans 1. Nubra
 2. Ripchar
 3. Markha
 4. Dras

Question ID : 81616113035

Status : Answered

Chosen Option : 1

Q.7 Which of the following places is famous for a copper

- mine? Ans 1. Khetri
 2. Keonjhar
 3. Gaya
 4. Satna

Question ID : 81616113854

Status : Answered

Chosen Option : 1

Q.8 Who among the following was one of the founders of the Hindustan Republic

- Association? Ans 1. Jatindranath Mukherjee
 2. Ram Prasad Bismil
 3. Surya Sen
 4. Lala Lajpat Rai

Question ID : 81616113352

Status : Answered

Chosen Option : 2

Q.9 In which of the following years was the Planning Commission of India set

up? Ans  1. 1962

 2. 1945

 3. 1950

 4. 1958

Question ID : 81616113357

Status : Answered

Chosen Option : 3

Q.10 Baghmara Pitcher Plant Sanctuary is located in which of the following

states? Ans 1. Assam

2. Karnataka

3. Goa

4. Meghalaya

Question ID : 81616113348

Status : Answered

Chosen Option : 4

Q.11 In December 2020, the Ministry of Home Affairs declared the entire State of _____ as a 'disturbed area' for six more months under the Armed Forces (Special Powers) Act, 1958 (AFSPA).

Ans 1. Jharkhand

2. Punjab

3. Nagaland

4. West Bengal

Question ID : 81616113867

Status : Answered

Chosen Option : 3

Q.12 Who among the following won the '3rd Rabindranath Tagore Literary Prize' for his novel 'The City and The Sea' in December 2020?

Ans 1. Raj Kamal Jha

2. Shekhar Gupta

3. Siddhartha Sarma

4. Rajdeep Sardesai

Question ID : 81616113355

Status : Answered

Chosen Option : 3

Q.13 In which of the following years was the Second Round Table Conference in London

held? Ans 1. 1931

2. 1941

3. 1939

4. 1925

Question ID : 81616113047

Status : Answered

Chosen Option : 1

Q.14 Unique Transaction Reference number is a _____ character code used to uniquely identify a transaction in the RTGS system.

Ans 1. 34

2. 45

3. 22

4. 17

Question ID : 81616113340

Status : Answered

Chosen Option : 4

Q.15 Who among the following is a Padma Vibhushan awardee of

2021? Ans 1. Sudarshan Sahoo

2. Tarlochan Singh

3. Mouma Das

4. Sumitra Mahajan

Question ID : 81616113859

Status : Not Answered

Chosen Option : --

Q.16 Which of the following is NOT a town/city on the west coast of

India? Ans 1. Surat

2. Gopalpur

3. Karwar

4. Mangalore

Question ID : 81616113953

Status : Answered

Chosen Option : 2

Q.17 Which of the following is a process in which hot, less dense materials rise upward and are replaced by colder, more dense materials?

Ans 1. Condensation

2. Radiation

3. Conduction

4. Convection

Question ID : 81616113346

Status : Answered

Chosen Option : 1

Q.18 Who among the following replaced Morarji Desai as the Prime Minister of India in

1979? Ans

- 1. Jagjivan Ram
- 2. Charan Singh
- 3. Chandrasekhar
- 4. Devi Lal

Question ID : 81616113962

Status : Answered

Chosen Option : 1

Q.19 Which of the following has the same dimension as that of linear

momentum? Ans 1. Impulse

- 2. Work
- 3. Stress
- 4. Energy

Question ID : 81616113848

Status : Answered

Chosen Option : 1

Q.20 Gurdwara Patalpuri Sahib is located on the bank of river_____.

Ans

- 1. Ganga
- 2. Sutlej
- 3. Yamuna
- 4. Beas

Question ID : 81616113945

Status : Answered

Chosen Option : 4

Q.21 Who won the Toyota Thailand Open Women's Singles Title in Bangkok in January

2021? Ans

- 1. Ashwini Ponnappa
- 2. Carolina Marin
- 3. Tai Tzu-ying
- 4. PV Sindhu

Question ID : 81616113056

Status : Answered

Chosen Option : 3

Q.22 Which of the following schemes is aimed at helping accelerate the uptake of broadband internet services?

- Ans
- 1. PM-DHWANI
 - 2. PM-INTERNET
 - 3. PM-WANI
 - 4. PM-VAARTA

Question ID : 81616113865

Status : Not Answered

Chosen Option : --

Q.23 _____ is the structural and functional unit of kidney.

- Ans
- 1. Nephron
 - 2. Cortex
 - 3. Ureter
 - 4. Medulla

Question ID : 81616113042

Status : Answered

Chosen Option : 1

Q.24 Electron-volt is a unit of ____.

- Ans
- 1. current
 - 2. power
 - 3. potential difference
 - 4. energy

Question ID : 81616113950

Status : Answered

Chosen Option : 3

Q.25 For which of the following franchise teams did AB de Villiers play in IPL

- 2020? Ans
- 1. Delhi Capitals
 - 2. Royal Challengers Bangalore
 - 3. Kolkata Knight Riders
 - 4. Mumbai Indians

Question ID : 81616113863

Status : Not Answered

Chosen Option : --

Q.1 If $x + y = 4$ and $\frac{1}{x} + \frac{1}{y} = \frac{16}{15}$, then what is the value of $(x^3 + y^3)$?

- Ans
- 1. 18
 - 2. 19
 - 3. 21
 - 4. 16

Question ID : 81616113879

Status : Answered

Chosen Option : 2

Q.2 If the 5-digit number $676xy$ is divisible by 3, 7 and 11, then what is the value of $(3x - 5y)$?

- Ans 1. 9
 2. 11
 3. 10
 4. 7

Question ID : 81616113969

Status : Not Answered

Chosen Option : --

Q.3 $\triangle ABC \sim \triangle PQR$. The areas of $\triangle ABC$ and $\triangle PQR$ are 64 cm^2 and 81 cm^2 , respectively and AD and PT are the medians of $\triangle ABC$ and $\triangle PQR$, respectively. If $PT = 10.8 \text{ cm}$, then $AD = ?$

- Ans 1. 9 cm
 2. 12 cm
 3. 8.4 cm
 4. 9.6 cm

Question ID : 81616113884

Some fruits are bought at 15 for ₹140 and an equal number of fruits at 10 for ₹120. If all the fruits are sold at ₹132 per dozen, then what is the profit percent in the entire transaction?

Status : Answered
Chosen Option : 4

Q.4 $4\frac{1}{2}$

- Ans 1. $4\frac{1}{2}$
 2. $2\frac{1}{4}$
 3. $3\frac{1}{8}$
 4. 3

Question ID : 81616113873

Status : Answered

Chosen Option : 3

Study the following table and answer the question:

Number of cars sold by dealers A, B, C, D & E during first six months of 2018.

Month \ Dealer	January	February	March	April	May	June
A	620	640	628	635	430	625
B	600	642	635	580	450	620
C	640	635	640	540	625	740
D	520	645	722	740	600	780
E	548	638	720	740	650	800

Q.5 The ratio of the total number of cars sold by dealer B in January, April and June to the total number of cars sold by dealers A and D in March is:

- Ans
1. 8 : 9
 2. 7 : 5
 3. 10 : 9
 - ✓ 4. 4 : 3

If $x + \frac{1}{x} = 4$, then the value of $x^5 + \frac{1}{x^5}$ is:

Question ID : 81616114192

Status : Answered

Chosen Option : 4

Q.6

- Ans
1. 776
 2. 736
 - ✓ 3. 724

The average of 14 numbers is 77. The average of first 14 numbers is 74 and the average of last 15 numbers is 84. If the 14th number is excluded, then what is the average of remaining numbers? (correct to one decimal places)

Question ID : 81616113982

Status : Answered

Chosen Option : 3

Q.7

- Ans
- ✓ 1. 74.7
 2. 77
 3. 73.1
 4. 76.9

Question ID : 81616113365

Status : Answered

Chosen Option : 1

Q.8 The value of $20 \div 5$ of $8 \times [9 \div 6 \times (6 - 3)] - (10 \div 2$ of $20)$ is:

- Ans
1. 6
 - ✓ 2. 2
 3. 1
 4. 0

Question ID : 81616113869

Status : Answered

To do a certain work, A and B work on alternate days with B beginning the work on the first day. A alone can complete the same work in 24 days. If the work gets completed in $11\frac{1}{3}$ days, then B alone can complete $\frac{7}{9}$ th part of the original work in:

Chosen Option : 2

Q.9

- Ans
1. 4 days
 2. 6 days
 3. $5\frac{1}{2}$ days
 4. $4\frac{1}{2}$ days

Question ID : 81616113977

Status : Answered

Chosen Option : 2

Q.10 If $8(x + y)^3 - 27(x - y)^3 = (5y - x)(Ax^2 + By^2 + Cxy)$, then what is the value of $(A + B - C)$?

- Ans
1. 16
 2. -26
 - ✓ 3. 36
 4. -16

Question ID : 81616113072

Status : Not Attempted and

Marked For Review

Chosen Option : --

Q.11 Length of each side of a rhombus is 13 cm and one of the diagonal is 24 cm. What is the area (in cm^2) of the rhombus?

- Ans
1. 60
 - ✓ 2. 120
 3. 300
 4. 240

Question ID : 81616113373

Status : Answered

Chosen Option : 4

Q.12 If $\frac{\cos^2 \theta}{\cot^2 \theta + \sin^2 \theta - 1} = 3$, $0^\circ < \theta < 90^\circ$, then the value of $(\tan \theta + \operatorname{cosec} \theta)$ is:



1. $\frac{2\sqrt{3}}{3}$

Ans



2.

3. $\frac{3\sqrt{3}}{3}$



4.

Question ID : 81616113987

Status : Not Attempted and

Marked For Review

Chosen Option : --

Q.13 Let $\Delta ABC \sim \Delta PQR$ and $\frac{\operatorname{ar}(\Delta ABC)}{\operatorname{ar}(\Delta PQR)} = \frac{144}{49}$. If $AB = 12$ cm, $BC = 7$ cm and $AC = 9$ cm, then PR (in cm) is equal to:

1. $\frac{12}{7}$

Q.13

Ans



2.

3. $\frac{21}{108}$

3. $\frac{7}{7}$



4.

Question ID : 81616113380

Status : Answered

Chosen Option : 4

Study the following table and answer the question:

Number of cars sold by dealers A, B, C, D & E during first six months of 2018.

Month \ Dealer	January	February	March	April	May	June
A	620	640	628	635	430	625
B	600	642	635	580	450	620
C	640	635	640	540	625	740
D	520	645	722	740	600	780
E	548	638	720	740	650	800

Q.14 In July 2018, if the sales of cars by the dealer D increases by the same percentage as in June 2018 over its previous month, then what is the number of cars sold by D in July 2018?

Ans

1. 1020
2. 975
3. 959

✓ 4. 1014

Question ID : 81616114194

Status : **Not Answered**

Chosen Option : --

A shopkeeper earns a profit of 21% after selling a book at 21% discount on the printed price. The ratio of the cost price and selling price of the book is:

- Q.15
- Ans
- 100 : 79
 - 79 : 100
 - ✓ 100 : 121
 - 121 : 100

Question ID : 81616113063

Status : Answered

Chosen Option : 3

Study the table and answer the question.

In the table, production and sale (in 1000 tonnes) of a certain product of a company over 5 years is given.

years	Production (in 1000 tonnes)	Sale (in 1000 tonnes)
2015	1250	1000
2016	1400	1290
2017	1450	1100
2018	1500	1450
2019	1600	1390

Q.16 In which year(s) sale is more than 90% of the production?

- Ans
- 2015, 2017, 2019
 - 2016, 2018
 - 2016, 2017
 - 2017, 2018

Question ID : 81616112679

Status : Answered

Chosen Option : 2

Q.17 When x is subtracted from each of 19, 28, 55 and 91, the numbers so obtained in this order are in proportion. What is the value of x?

- Ans
- 5
 - 8
 - ✓ 7
 - 9


Question ID : 81616113066

Status : Answered

Chosen Option : 3

Q.18 A chord 21 cm long is drawn in a circle of diameter 25 cm. The perpendicular distance of the chord from the centre is:

Ans

-  1. $\sqrt{41}$
2. $\sqrt{23}$
3. $\sqrt{56}$ 4.
 $\sqrt{46}$

Question ID : 81616113377

Status : Answered

Chosen Option : 3


Study the table and answer the question.

Table shows District-wise data of the number of primary school teachers posted in schools of a city.

District	Male teachers	Female teachers
East	1650	2375
North	1075	2651
West	1280	1520
South	1170	1085
Central	690	859

Q.19 What is the ratio of the number of male teachers to the number of female teachers in the city?

Ans

1. 195 : 283
2. 586 : 849
 3. 391 : 566
4. 78 : 113

What is the compound interest (in ₹) on a sum of ₹8192 for $1\frac{1}{4}$ years at 15% per annum, if interest is compounded 5-monthly?


Question ID : 81616112677

Status : Answered

Chosen Option : 2

Q.20

Ans

1. 1740
2. 1735
 3. 1634
4. 1640

Question ID : 81616113976

Status : Not Answered

Chosen Option : --

X, Y are two points in a river. Points P and Q divide the straight line XY into three equal parts. The river flows along XY and the time taken by a boat to row from X to Q and from Y to Q are in the ratio 4 : 5. The ratio of the speed of the boat downstream to

Q.21 that of the river current is equal to:

- Ans
1. 4 : 3
 - ✓ 2. 10 : 3
 3. 3 : 10
 4. 3 : 4

$$\frac{\operatorname{cosec} \theta}{\operatorname{cosec} \theta - 1} + \frac{\operatorname{cosec} \theta}{\operatorname{cosec} \theta + 1} - \tan^2 \theta, 0^\circ < \theta < 90^\circ,$$

is equal to:

Question ID : 81616113069

Status : Not Answered

Chosen Option : --

Q.22

- Ans
1. $1 - \tan^2 \theta$
 2. $\sec^2 \theta$
 3. $2\sec^2 \theta$
 4. $\sec^2 \theta + 1$

$$\frac{\sqrt{3}}{2} \quad \text{Status : Answered}$$

Question ID : 81616114090

Chosen Option : 2

Q.23 Find the value of $\cot 25^\circ \cot 35^\circ \cot 45^\circ \cot 55^\circ \cot 65^\circ$.

- Ans ✓ 1. 1

✗ 2.


3. $\sqrt{3}$ 4.

$\frac{1}{\sqrt{3}}$

Question ID : 81616112777

Status : Answered

Chosen Option : 1

- Ans  1. 77000
 2. 75000
 3. 73500

The income of D is 20% more than that of C. If the difference between the incomes of B and D is ₹13200, then the income (in ₹) of C is:

Question ID : 81616113973

Status : Not Answered

Chosen Option : --

Q.25

- Ans  1. 30°
 2. 28°

Sides AB and DC of a cyclic quadrilateral ABCD are produced to meet at E and sides AD and BC are produced to meet at F. If $\angle AEC = 78^\circ$ and $\angle BEC = 52^\circ$, then the measure of $\angle AFB$ is:

4. 32°

Question ID : 81616113984





Status : Not Answered

Chosen Option : --

Section : English Comprehension

Q.1 Select the option that expresses the given sentence in passive voice.

The invigilator is advising the students not to carry calculators into the examination hall.

- Ans  1. The students are being advised by the invigilator not to carry calculators into the examination hall.
-  2. The students have been advised not to carry calculators into the examination hall by the invigilator.
-  3. The students were advised not to carry calculators into the examination hall.
-  4. The students were advised the invigilator not to carry calculators into the examination hall.

Question ID : 81616113996

Status : Answered

Chosen Option : 1

Q.2 Select the most appropriate option to fill in the blank.

India is formally moving ahead to _____ 21 MIG-29 and 12 Sukhoi-30MKI fighters from Russia along with upgrades of their existing fleets.

- Ans
- 1. accomplish
 - 2. achieve
 - 3. advance
 - 4. procure

Question ID : 81616113413

Status : Answered

Chosen Option : 4

Q.3 Sentences of a paragraph are given below in jumbled order. Arrange the sentences in the right order to form a meaningful and coherent paragraph.

- A. But the eagle, in wrath, gave the beetle a flap of his wing, and straightaway seized upon the hare and devoured him.
- B. The beetle therefore interceded with the eagle, begging of him not to kill the poor suppliant, and pleaded with him not to kill so small an animal.
- C. When the eagle flew away, the beetle flew after him, to learn where his nest was.
- D. A hare, being pursued by an eagle, took himself for refuge to the nest of a beetle, whom he begged to save him.

- Ans
- 1. ACDB
 - 2. DCAB
 - 3. CBAD
 - 4. DBAC

Question ID : 81616113905

Status : Answered

Chosen Option : 3

Q.4 Select the most appropriate meaning of the given idiom.

Bang for the buck

- Ans
- 1. A sorrowful heart
 - 2. More value for money
 - 3. Dash against something
 - 4. Less value for money

Question ID : 81616113104

Status : Answered

Chosen Option : 3

Q.5 Select the option that expresses the given sentence in indirect speech.

“Everything is going to be alright,” said the doctor.

- Ans
- 1. The doctor said that everything are going to be alright.
 - 2. The doctor said that everything will be alright.
 - 3. The doctor said that everything was going to be alright.
 - 4. The doctor said that everything is going to be alright.

Question ID : 81616113391

Status : Answered

Chosen Option : 4

Q.6 Select the most appropriate synonym of the given word.

Generic

- Ans
- 1. Specific
 - 2. Definite
 - 3. Universal
 - 4. Precise

Question ID : 81616113403

Status : Answered

Chosen Option : 3

Q.7 Select the most appropriate meaning of the given idiom.

Raise the bar

- Ans 1. To grow taller
2. To set higher goals
3. To win a competition
4. To raise the price

Question ID : 81616113103

Status : Answered

Chosen Option : 2

Q.8 Select the option that can be used as a one-word substitute for the given group of words.

A herd or flock of animals being driven in a

- body Ans 1. Crowd
2. Cluster
3. Throng
4. Drove

Question ID : 81616114015

Status : Answered

Chosen Option : 3

Q.9 Select the most appropriate synonym of the given word.

Regime

- Ans 1. Country
2. Rule
3. Territory
4. Space

Question ID : 81616113402

Status : Answered

Chosen Option : 3

Q.10 Select the most appropriate option to substitute the underlined segment in the given sentence. If no substitution is required, select 'No substitution'.

The toy drummer plays the drum if you press the button at the back.

- Ans
- 1. will play the drum if you will press
 - 2. playing the drum if you pressed
 - 3. played the drum if you are pressing
 - 4. No substitution

Question ID : 81616113998

Status : Answered

Chosen Option : 4

Q.11 Select the INCORRECTLY spelt word.

- Ans
- 1. Unmanageable
 - 2. Wildernesses
 - 3. Voilence
 - 4. Exterminated

Question ID : 81616113916

Status : Answered

Chosen Option : 3

Q.12 Select the most appropriate ANTONYM of the given word.

Gradual

- Ans
- 1. Abrupt
 - 2. Slow
 - 3. Regular
 - 4. Gentle

Question ID : 81616113102

Status : Answered

Chosen Option : 1

Q.13 Sentences of a paragraph are given below in jumbled order. Arrange the sentences in the right order to form a meaningful and coherent paragraph.

- A. When we got near, we saw it was the steam rising from hot springs.
- B. We saw in the distance a great column of smoke.
- C. We wondered if it came from a chimney or a burning house.
- D. We thought of taking a bath in the hot water.

- Ans
- 1. BCDA
 - 2. ABCD
 - 3. BCAD
 - 4. ACDB

Question ID : 81616113098

Status : Answered

Chosen Option : 1

Q.14 Select the most appropriate option to fill in the blank.

Work and domestic _____ made Kajal short-tempered.

Ans 1. pressures

2. weights

3. gravities

4. forces

Question ID : 81616114018

Status : Answered

Chosen Option : 1

Q.15 Select the INCORRECTLY spelt

word. Ans 1. Pieceful

2. Creature

3. Specified

4. Decrease

Question ID : 81616113915

Status : Answered

Chosen Option : 1

Q.16 Select the most appropriate ANTONYM of the given word.

Seize

Ans 1. Grab

2. Catch

3. Snatch

4. Loosen

Question ID : 81616113909

Status : Answered

Chosen Option : 4

Q.17 The following sentence has been divided into parts. One of them contains an error. Select the part that contains the error from the given options.

You must avoid riding in a crowded bus / or travelling in a metro / during rush hour / as both are quiet unpleasant experiences.

Ans 1. as both are quiet unpleasant experiences

2. during rush hour

3. or travelling in a metro

4. You must avoid riding in a crowded bus

Question ID : 81616113995

Status : Answered

Chosen Option : 4

Q.18 The following sentence has been split into four segments. Identify the segment that contains a grammatical error.

Had you / not reached in time, / we will have / lost our lives.

- Ans
- 1. Had you
 - 2. lost our lives
 - 3. not reached in time
 - 4. we will have

Question ID : 81616113085

Status : Answered

Chosen Option : 4

Q.19 Select the most appropriate option to substitute the underlined segment in the given sentence. If no substitution is required, select 'No substitution'.

While washing your hands, rub them together for 20 seconds to remove the microbes on t hem.

- Ans 1. the microbes on their
2. the microbes on those
3. the microbes on they
4. No substitution

Question ID : 81616113393

Status : Answered

Chosen Option : 4

Q.20 Select the option that can be used as a one-word substitute for the given group of words.

A group of three novels or plays, each complete in

- itself Ans 1. Triplet
2. Trivet
3. Triumvir
4. Trilogy

Question ID : 81616114014

Status : Answered

Chosen Option : 4

Comprehension:

In the following passage, some words have been deleted. Fill in the blanks with the help of the alternatives given. Select the most appropriate option for each blank.

What every tourist must take back from Bhutan is pure honey, especially Putka,

"Antibiotic" honey produced (1) _____

_____ Melipona Bees (stingless bees) a breed found in protected areas (2) 700 to 1,500 metres above sea level. Due (3) their small size, they can get larger nutrients (4) regular honeybees. It has a tangy/sour taste and can (5) your sore throat in a matter of minutes.

SubQuestion No : 21

Q.21 Select the most appropriate option to fill in blank number

1. Ans 1. of
2. through
3. by
4. with

Question ID : 81616113900

Status : Answered

Chosen Option : 3

Comprehension:

In the following passage, some words have been deleted. Fill in the blanks with the help of the alternatives given. Select the most appropriate option for each blank.

What every tourist must take back from Bhutan is pure honey, especially Putka, "Antibiotic" honey produced (1) _____
 _____ Melipona Bees (stingless bees) a breed found in protected areas (2) 700 to 1,500 metres above sea level. Due (3) their small size, they can ~~get larger nutrients~~ (4) _____ regular honeybees. It has a tangy/sour taste and can (5) your sore throat in a matter of minutes.

SubQuestion No : 22

Q.22 Select the most appropriate option to fill in blank number

2. Ans 1. midst

2. after

3. between

4. among

Question ID : 81616113901

Status : Answered

Chosen Option : 3

Comprehension:

In the following passage, some words have been deleted. Fill in the blanks with the help of the alternatives given. Select the most appropriate option for each blank.

What every tourist must take back from Bhutan is pure honey, especially Putka, "Antibiotic" honey produced (1) _____
 _____ Melipona Bees (stingless bees) a breed found in protected areas (2) 700 to 1,500 metres above sea level. Due (3) their small size, they can get larger nutrients (4) regular honeybees. It has a tangy/sour taste and can (5) your sore throat in a matter of minutes.

SubQuestion No : 23

Q.23 Select the most appropriate option to fill in blank number

3. Ans 1. for

2. at

3. to

4. of

Question ID : 81616113902

Status : Answered

Chosen Option : 3

Comprehension:

In the following passage, some words have been deleted. Fill in the blanks with the help of the alternatives given. Select the most appropriate option for each blank.

What every tourist must take back from Bhutan is pure honey, especially Putka, "Antibiotic" honey produced (1) _____
 _____ Melipona Bees (stingless bees) a breed found in protected areas (2) 700 to 1,500 metres above sea level. Due (3) their small size, they can ~~get larger nutrients~~ (4) _____ regular honeybees. It has a tangy/sour taste and can (5) your sore throat in a matter of minutes.

SubQuestion No : 24

Q.24 Select the most appropriate option to fill in blank number

4. Ans 1. then

2. than

3. though

4. and

Question ID : 81616113903

Status : Answered

Chosen Option : 4

Comprehension:

In the following passage, some words have been deleted. Fill in the blanks with the help of the alternatives given. Select the most appropriate option for each blank.

What every tourist must take back from Bhutan is pure honey, especially Putka, "Antibiotic" honey produced (1) _____
 _____ Melipona Bees (stingless bees) a breed found in protected areas (2) 700 to 1,500 metres above sea level. Due (3) their small size, they can get larger nutrients (4) regular honeybees. It has a tangy/sour taste and can (5) your sore throat in a matter of minutes.

SubQuestion No : 25

Q.25 Select the most appropriate option to fill in blank number

5. Ans 1. pacify

2. appease

3. soothe

4. calm

Question ID : 81616113904

Status : Answered

Chosen Option : 1