

SSC CGL 2022 TIER 1 DECEMBER 9, 2022 SHIFT 4 QUESTION PAPER

Exam Date	09/12/2022
Exam Time	5:15 PM - 6:15 PM
Subject	Combined Graduate Level Examination Tier I 2022

Section : General Intelligence and Reasoning

Q.1 In a certain code language, 'FLOAT' is written as 'WONZI' and 'TRIBE' is written as 'DUHEW'. How will 'GARDEN' be written in that language?

- Ans
- 1. QZQGDJ
 - 2. QZUHDJ
 - 3. QZUGDJ
 - 4. QDUGHJ

Question ID : 26433067580

Status : Not Answered

Chosen Option : --

Q.2 Select the set in which the numbers are related in the same way as are the numbers of the following set.

(NOTE : Operations should be performed on the whole numbers, without breaking down the numbers into its constituent digits. E.g. 13 – Operations on 13 such as adding /subtracting /multiplying etc. to 13 can be performed. Breaking down 13 into 1 and 3 and then performing mathematical operations on 1 and 3 is NOT allowed)
(21, 33, 31)
(42, 17, 26)

- Ans
- 1. (36, 14, 35)
 - 2. (46, 19, 24)
 - 3. (35, 27, 29)
 - 4. (32, 39, 20)

INDIA

Question ID : 26433067925

Status : Not Answered

Chosen Option : --

Q.3 By interchanging the given two signs and numbers which of the following equation will be correct?
+ and –, 6 and 3

- Ans
- 1. $8 - 3 \times 4 + 6 + 9 = 18$
 - 2. $8 + 4 \times 6 \div 3 - 9 = 15$
 - 3. $9 + 3 \times 4 - 6 + 7 = 10$
 - 4. $6 + 2 \times 8 + 3 - 1 = 20$

Question ID : 264330105133

Status : Not Answered

Chosen Option : --

Q.4 Select the option that is related to the third word in the same way as the second word is related to the first word. (The words must be considered as meaningful English words and must not be related to each other based on the number of letters/number of consonants/vowels in the word)

Pain : Agony :: Anger: ?

- Ans
- 1. Calm
 - 2. Rage
 - 3. Sad
 - 4. Peace

Question ID : 26433067817

Status : Answered

Chosen Option : 3

Q.5 Select the odd group of numbers. (NOTE: Operations should be performed on the whole numbers, without breaking down the numbers into its constituent digits. E.g.13 – Operations on 13 such as adding /subtracting /multiplying etc. to 13 can be performed. Breaking down 13 into 1 and 3 and then performing mathematical operations on 1 and 3 is not allowed)

- Ans
- 1. (19 –28 –48)
 - 2. (17 –27 –47)
 - 3. (15 –25 –49)
 - 4. (13 –23 –43)

Question ID : 264330105077

Status : Not Answered

Chosen Option : --

Q.6 By Interchanging the given two numbers which of the following equation will be correct?
1 and 9

- Ans
- 1. $9 \times 3 - 4 + 2 + 1 = 10$
 - 2. $1 + 9 \times 3 - 4 + 2 = 18$
 - 3. $9 \times 2 + 1 - 8 + 4 = 12$
 - 4. $9 - 1 + 6 + 2 \times 3 = 7$

Question ID : 264330105098

Status : Answered

Chosen Option : 1

Q.7 Which of the following calendars will be the same as the calendar for the year 2009?

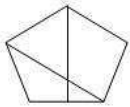
- Ans
- 1. 2025
 - 2. 2015
 - 3. 2036
 - 4. 2042

Question ID : 26433093114

Status : Answered

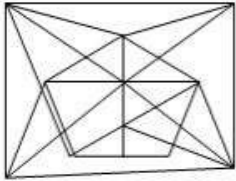
Chosen Option : 2

Q.8 Select the option in which the given figure is embedded (rotation is NOT allowed).

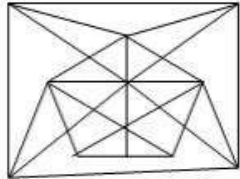


Ans

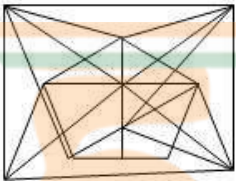
✗ 1.



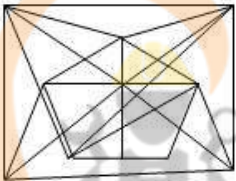
✓ 2.



✗ 3.



✗ 4.



Question ID : 26433068298

Status : Answered

Chosen Option : 2

Q.9 Select the correct mirror image of the given combination when the mirror is placed at 'PQ' as shown below.

TRAUM8TIC

P
|
Q

Ans

✗ 1.

ITOMUART

✓ 2.

IT8MUART

✗ 3.

IT8MAURT

✗ 4.

ITAMUART

Question ID : 26433067830

Status : Answered

Chosen Option : 2

Q.10 Three different positions of the same dice are shown. Find the number on the face opposite the face showing '3'.

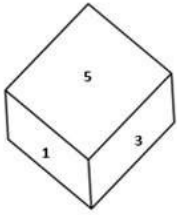


Figure 1

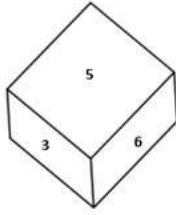


Figure 2

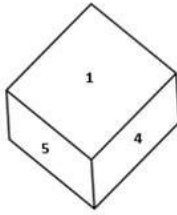


Figure 3

- Ans
- 1. 2
 - 2. 1
 - 3. 4
 - 4. 6

Question ID : 26433079374

Status : Answered

Chosen Option : 3

Q.11 If $P \div Q$ means that P is the mother of Q, $P - Q$ means that P is the father of Q, $P \times Q$ means that P is the sister of Q, then which of the following expression shows that B is the daughter of A?

- Ans
- 1. $B - A + C$
 - 2. $A - B + C$
 - 3. $A - B \times C$
 - 4. $C + B - A$



Question ID : 264330104974

Status : Answered

Chosen Option : 4

Q.12 Three statements are followed by three conclusions numbered I, II and III. You have to consider these statements to be true, even if they seem to be at variance with commonly known facts. Decide which of the given conclusions logically follow/s from the given statements.

Statements:

Some watches are projectors.

All projectors are lamps.

Some heaters are watches.

Conclusions:

(I) Some heaters are projectors.

(II) Some lamps are heaters.

(III) All watches are lamps.

- Ans
- 1. Only conclusion II follows
 - 2. None of the conclusions follow
 - 3. Only conclusion I follows
 - 4. Either conclusion I or conclusion III follows

Question ID : 26433066000

Status : Answered

Chosen Option : 2

Q.13 Select the option that is related to the third word in the same way as the second word is related to the first word.

(The words must be considered as meaningful English words and must not be related to each other based on the number of letters/number of consonants/vowels in the word.)

Paint : Art :: Prose : ?

- Ans
- 1. Music
 - 2. Literature
 - 3. Drama
 - 4. Theatre

Question ID : 26433056813

Status : Answered

Chosen Option : 2

Q.14 A # B means 'A is the brother of B'

A @ B means 'A is the son of B'

A & B means 'A is the wife of B'

A % B means 'A is the mother of B'

If A % B & C # D @ E, then how is B related to E?

- Ans
- 1. Sister
 - 2. Wife
 - 3. Daughter
 - 4. Daughter-in-law

Question ID : 26433065959

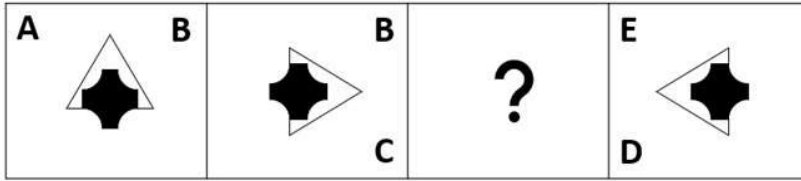
Status : Answered

Chosen Option : 3




INDIA

Q.15 Select the figure from among the given options that can replace the question mark (?) in the following series.

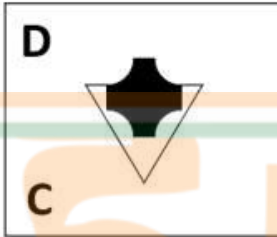


Ans

✗ 1.



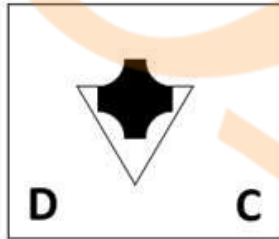
✗ 2.



✗ 3.



✓ 4.



Question ID : 26433057786

Status : Answered

Chosen Option : 4

Q.16 In the following question, select the missing number from the given series.

15, 4, -8, -21, -35, ?

Ans ✗ 1. -48

✓ 2. -50

✗ 3. -49

✗ 4. -30

Question ID : 264330105012

Status : Answered

Chosen Option : 2

Q.17 A series is given with one term missing. Select the correct alternative from the given ones that will complete the series.
ABCD, EVKT, IPSJ, MJAZ, ?

- Ans 1. RQPH
 2. QDIP
 3. TDIC
 4. RMQR

Question ID : 264330104836

Status : **Not Attempted and Marked For Review**

Chosen Option : --

Q.18 Select the set in which the numbers are related in the same way as are the numbers of the following set.

(NOTE : Operations should be performed on the whole numbers, without breaking down the numbers into its constituent digits. E.g. 13 – Operations on 13 such as adding / subtracting / multiplying etc. to 13 can be performed. Breaking down 13 into 1 and 3 and then performing mathematical operations on 1 and 3 is NOT allowed)
(4, 21, 33)
(10, 111, 141)

- Ans 1. (13, 45, 97)
 2. (25, 53, 128)
 3. (65, 60, 244)
 4. (24, 52, 128)

Question ID : 26433082544

Status : **Not Answered**

Chosen Option : --

Q.19 Which of the following letter-clusters will replace the question mark (?) in the given series?
ARC, EPF, JNI, PLL, ?

- Ans 1. WJO
 2. QLP
 3. WLQ
 4. QKP

Question ID : 26433057993

Status : **Not Answered**

Chosen Option : --

Q.20 Three of the following letter-clusters are alike in some manner and hence form a group. Which letter-cluster does not belong to that group?

- Ans 1. DOL
 2. MIP
 3. ARI
 4. NEV

Question ID : 26433081495

Status : **Not Answered**

Chosen Option : --

Q.21 In a certain code language, 'TEACHER' is written as 'AETCREH' and 'STUDENT' is written as 'UTSDTNE'. How will 'CLASSES' be written in that language?

- Ans 1. ALCSSSES
 2. SESSALC
 3. ALCSSESS
 4. CLASSESS

Question ID : 26433066026
Status : Answered
Chosen Option : 1

Q.22 Which two signs should be interchanged to make the given equation correct?
 $81 \times 9 + 15 \div 3 - 4 = 50$

- Ans 1. - and *
 2. + and -
 3. + and -
 4. ÷ and *

Question ID : 26433067847
Status : Answered
Chosen Option : 4

Q.23 In the following question below are given some statements followed by some conclusions based on those statements. Taking the given statements to be true even if they seem to be at variance from commonly known facts. Read all the conclusions and then decide which of the given conclusion logically follows the given statements.

Statements:

- I. Some A are W.
II. Some W are C.

Conclusions:

- I. All A are C.
II. No C is W.
III. No W is A.

- Ans 1. Neither conclusion follows
 2. Only conclusion II follows
 3. All conclusion follows
 4. Only conclusion I follows

Question ID : 264330104956
Status : Answered
Chosen Option : 1

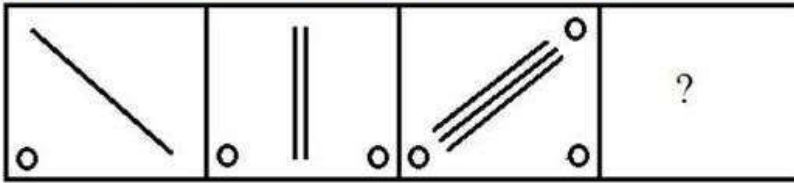
Q.24 Select the option that is related to the fifth number in the same way as the second number is related to the first number and the fourth number is related to the third number.

$12 : 132 :: 20 : 380 :: 2 : ?$

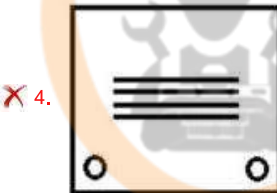

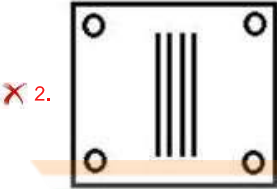
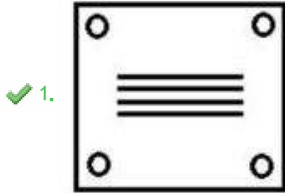
- Ans 1. 8
 2. 6
 3. 12
 4. 2

Question ID : 26433067648
Status : Answered
Chosen Option : 4

Q.25 Select the figure that will come next in the following series.



Ans



Question ID : 26433078977
Status : Answered
Chosen Option : 1

Section : General Awareness

Q.1 Prithviraja III defeated an Afghan ruler named _____ in 1191.

- Ans
- ✗ 1. Sultan Mahmud
 - ✗ 2. Muhammad Ibn Abbas
 - ✗ 3. Muhammad Ibn Suri
 - ✓ 4. Sultan Muhammad Ghori

Question ID : 264330105414
Status : Answered
Chosen Option : 4

Q.2 Sharmila Biswas, who was awarded the 'Best Choreography Award' in 1998 by the Ministry of Information and Broadcasting, represents which of the following classical dance forms?

- Ans
- 1. Manipuri
 - 2. Odissi
 - 3. Kathakali
 - 4. Kathak

Question ID : 26433090701
Status : Answered
Chosen Option : 2

Q.3 The Paralympics Games - 2024 will be hosted by _____.

- Ans
- 1. USA
 - 2. China
 - 3. Spain
 - 4. France

Question ID : 26433071555
Status : Answered
Chosen Option : 4

Q.4 The women of which tribe perform the traditional folk dance called Chakri?

- Ans
- 1. Kaul
 - 2. Kanjar
 - 3. Gond
 - 4. Bharia



Question ID : 26433064376
Status : Not Answered
Chosen Option : --

Q.5 Which of the following terms is NOT included in the Preamble of Indian Constitution?

- Ans
- 1. Sovereign
 - 2. Justice
 - 3. Fraternity
 - 4. Federalism

Question ID : 26433086766
Status : Answered
Chosen Option : 4

Q.6 The State Finance Commission is appointed every ____ years by the _____.

- Ans
- 1. 5, state government
 - 2. 5, central government
 - 3. 2.5, state government
 - 4. 2.5, central government

Question ID : 26433064832
Status : Marked For Review
Chosen Option : 1

Q.7 The Energy Conservation (Amendment) Bill, 2022 amends the Energy Conservation Act, 2001 to empower the central government to specify a _____.

- Ans
- 1. carbon credit trading scheme
 - 2. coal based station
 - 3. coastal regulation scheme
 - 4. eco-sensitive zone

Question ID : 264330105246
Status : Not Answered
Chosen Option : --

Q.8 The Delhi Municipal Corporation (Amendment) Bill 2022 seeks to unify the how many municipal corporations into a single one?

- Ans
- 1. Four
 - 2. Three
 - 3. Two
 - 4. Five

Question ID : 264330105250
Status : Not Answered
Chosen Option : --

Q.9 What is the role of ribosomes of a polysome?

- Ans
- 1. The ribosomes synthesise the fats
 - 2. The ribosomes of a polysome translate the mRNA into proteins.
 - 3. The ribosomes of a polysome translate the rRNA into proteins.
 - 4. The ribosomes of a monosome translate the rRNA into proteins.

Question ID : 26433086749
Status : Not Answered
Chosen Option : --

Q.10 Which type of tax acts as an automatic stabiliser in the economy?

- Ans
- 1. Professional tax
 - 2. Wealth tax
 - 3. Capital gains tax
 - 4. Proportional income tax

Question ID : 264330105366
Status : Not Answered
Chosen Option : --

Q.11 The world's largest river lies in which of the following continent?

- Ans
- 1. South America
 - 2. Australia
 - 3. Africa
 - 4. North America

Question ID : 264330105623
Status : Answered
Chosen Option : 1

Q.12 In which of the following months is Gokulashtami celebrated every year as per Hindu tradition?

- Ans
- 1. Vaishakh
 - 2. Bhadrapada
 - 3. Asadha
 - 4. Chaitra

Question ID : 26433072639
Status : Not Answered
Chosen Option : --

Q.13 Which of the following is NOT a method of measuring national income?

- Ans
- 1. Intermediate goods method
 - 2. Expenditure method
 - 3. Income method
 - 4. Product method

Question ID : 26433065427
Status : Answered
Chosen Option : 1

Q.14 Sambhar Lake is situated in which of the following states?

- Ans
- 1. Kerala
 - 2. Madhya Pradesh
 - 3. Rajasthan
 - 4. Karnataka



Question ID : 26433066518
Status : Answered
Chosen Option : 3

Q.15 Which of the following waterways separates India from Sri Lanka?

- Ans
- 1. Arabian Sea
 - 2. Bay of Bengal
 - 3. Andaman Sea
 - 4. Palk Strait

Question ID : 26433064471
Status : Answered
Chosen Option : 4

Q.16 Which of the following is the highest gravity dam in India?

- Ans
- 1. Hirakund Dam
 - 2. Bhakra Dam
 - 3. Sardar Sarovar Dam
 - 4. Mettur Dam

Question ID : 26433089216
Status : Answered
Chosen Option : 2

Q.17 Identify the chemical formula of ammonium hydroxide.

Ans 1. NH_4OH

2. NH_4O_2

3. NH_3O

4. NH_2OH

Question ID : 26433087878

Status : Answered

Chosen Option : 4

Q.18 Which of the following sites of Harappan civilization is located near Bolan Pass?

Ans 1. Mehrgarh

2. Chirand

3. Gufkral

4. Koldihwa

Question ID : 264330105164

Status : Not Answered

Chosen Option : --

Q.19 How much percentage of nitrogen is present in the atmosphere?

Ans 1. 78%

2. 89%

3. 67%

4. 71%

Question ID : 26433086614

Status : Answered

Chosen Option : 1

Q.20 Partition of Bengal held in _____.

Ans 1. 1901

2. 1903

3. 1905

4. 1907

Question ID : 264330105568

Status : Answered

Chosen Option : 3

Q.21 In which year was India House established by Shyamji Verma?

Ans 1. 1905

2. 1899

3. 1902

4. 1909

Question ID : 26433089150

Status : Not Answered

Chosen Option : --

Q.22 In September 2022, which High Court has declared the “Duare Ration” scheme as illegal and against the National Food Security Act?

- Ans
- 1. Delhi
 - 2. Calcutta
 - 3. Patna
 - 4. Allahabad

Question ID : 264330105219
Status : Answered
Chosen Option : 2

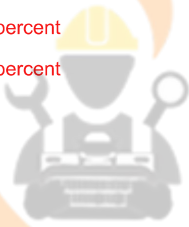
Q.23 Which country beat India in the men's hockey semi-final event at Tokyo Olympics, 2020?

- Ans
- 1. Germany
 - 2. Pakistan
 - 3. Belgium
 - 4. Australia

Question ID : 26433071544
Status : Answered
Chosen Option : 3

Q.24 According to census 2011, the literacy rate of India is _____.

- Ans
- 1. 75.04 percent
 - 2. 74.04 percent
 - 3. 77.04 percent
 - 4. 76.04 percent



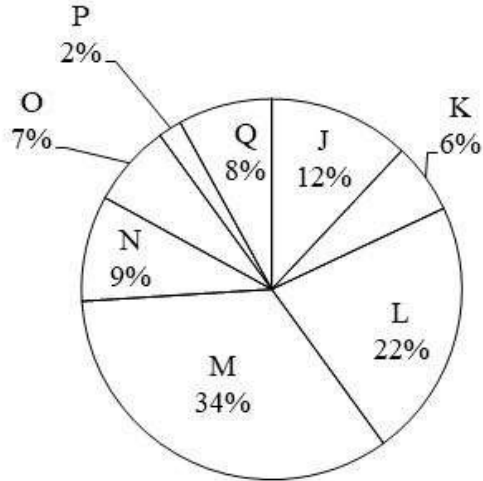
Question ID : 264330105530
Status : Answered
Chosen Option : 2

Q.25 With which instrument is Ustad Sultan Khan associated?

- Ans
- 1. Sitar
 - 2. Sarod
 - 3. Tabla
 - 4. Sarangi

Question ID : 26433064781
Status : Answered
Chosen Option : 2

Q.1 The pie chart given below shows the number of boys in 8 schools. The total number of boys in all these 8 school is 6000. Number of boys in a particular school is shown as a percent of total number of boys in all these 8 schools.



Which of the following statement is correct?

- I. The difference between number of boys in school M and Q are 1660.
- II. The sum of number of boys in school J, K and L are 2400.

- Ans
- 1. Both I and II
 - 2. Only I
 - 3. Only II
 - 4. Neither I nor II

Question ID : 264330105772

Status : Answered

Chosen Option : 4

Q.2 The remainder when $19^{19} + 20$ is divided by 18, is:

- Ans
- 1. 3
 - 2. 2
 - 3. 1
 - 4. 0

Question ID : 26433074448

Status : Answered

Chosen Option : 1

Q.3 What is the value of $\sin 75^\circ + \sin 15^\circ$?

- Ans
- 1. $\frac{1}{\sqrt{2}}$
 - 2. $\frac{\sqrt{3}}{2}$
 - 3. $\frac{\sqrt{3}}{\sqrt{2}}$
 - 4. $\frac{3}{\sqrt{2}}$

Question ID : 264330105890

Status : Not Answered

Chosen Option : --

Q.4 The following table shows the number of elected persons from various parties in a state assembly.

Years \ Party	2015	2016	2017	2018	2019	2020
P	62	70	52	90	82	80
Q	80	90	60	70	76	70
R	90	80	100	50	80	65
S	55	60	70	80	75	72

Find the difference between the number of seats won by party R and party Q in all the elections put together.

- Ans
- 1. 18
 - 2. 19
 - 3. 17
 - 4. 20

Question ID : 26433075958

Status : Answered

Chosen Option : 2

Q.5 The table given below shows the number of students joining in 6 different universities.

Universities	Students
A	275
B	215
C	350
D	250
E	450
F	170

What is the ratio number of students joining in university A to the number of student joining in university F?

- Ans
- 1. 17 : 39
 - 2. 51 : 37
 - 3. 34 : 51
 - 4. 55 : 34

Question ID : 264330105763

Status : Answered

Chosen Option : 4

Q.6 A grocery shop is offering 10% discount on the purchase of Rs.500 and above. A 5% discount is given on the purchase of value above Rs.250 but below Rs.500. A discount of additional 1% is given if payment is made instantly in cash. How much would a customer have to pay by cash if he buys 25 packets of biscuits and one packet is priced at Rs.30?

- Ans
- 1. Rs.670.25
 - 2. Rs.668.25
 - 3. Rs.675
 - 4. Rs.667.05

Question ID : 26433075861

Status : Not Answered

Chosen Option : --

Q.7 If the ratio of corresponding sides of two similar triangles is $\sqrt{5} : \sqrt{7}$ then what is the ratio of the area of the two triangles?

- Ans
- 1. $\sqrt[3]{5} : \sqrt{7}$
 - 2. 25 : 49
 - 3. $\sqrt{5} : \sqrt{7}$
 - 4. 5 : 7

Question ID : 264330105817
Status : Answered
Chosen Option : 4

Q.8 If $\operatorname{cosec} \theta + \cot \theta = 2$, then what is the value of $\operatorname{cosec} \theta$?

- Ans
- 1. $\frac{5}{4}$
 - 2. $\sqrt{2}$
 - 3. $\sqrt{5}$
 - 4. $\frac{3}{2}$

Question ID : 26433058988
Status : Answered
Chosen Option : 1

Q.9 In the given figure, ABC is an isosceles triangle with $BC = 8$ cm and $AB = AC = 5$ cm. The value of $\tan C - \cot B$ is _____.



- Ans
- 1. $-\frac{5}{12}$
 - 2. $-\frac{7}{12}$
 - 3. $\frac{7}{12}$
 - 4. $\frac{5}{12}$

Question ID : 26433062662
Status : Not Answered
Chosen Option : --

Q.10 The LCM of $\frac{3}{8}$, $\frac{5}{16}$ and $\frac{7}{2}$ is:

- Ans
- 1. $101\frac{1}{2}$
 - 2. $52\frac{1}{2}$
 - 3. $28\frac{1}{2}$
 - 4. $25\frac{1}{4}$

Question ID : 26433079822
Status : Answered
Chosen Option : 2

Q.11 In an election between two candidates, a candidate who gets 64% of the votes polled is elected by a majority of 252 votes. What is the total number of votes polled?

- Ans
- 1. 950
 - 2. 900
 - 3. 850
 - 4. 800

Question ID : 26433061401
Status : Answered
Chosen Option : 2

Q.12 The table given below shows the number of salesman in five companies.

Companies	Salesman
C1	35
C2	10
C3	30
C4	5
C5	15

What is the average number of salesman in C2, C4 and C5?

- Ans
- 1. 5
 - 2. 10
 - 3. 15
 - 4. 20

Question ID : 264330105723
Status : Answered
Chosen Option : 2

Q.13 If $y + \frac{1}{y} = 11$, then the value of $y^3 - \frac{1}{y^3}$ is:

- Ans
- 1. $345\sqrt{13}$
 - 2. $360\sqrt{13}$
 - 3. $352\sqrt{13}$
 - 4. $368\sqrt{13}$

Question ID : 26433080238
Status : Not Answered
Chosen Option : --

Q.14 The number of solid spheres, each of diameter 6 cm, that could be moulded to form a solid metal cylinder of height 90cm and diameter 4 cm is:

- Ans
- 1. 10
 - 2. 14
 - 3. 16
 - 4. 13

Question ID : 26433063905
Status : Answered
Chosen Option : 1

Q.15 If $b \cos \theta = a$, then $\operatorname{cosec} \theta + \cot \theta =$ _____.

- Ans
- 1. $\sqrt{\frac{1}{b+a}}$
 - 2. $\sqrt{\frac{b-a}{b+a}}$
 - 3. $\sqrt{\frac{b+a}{b-a}}$
 - 4. $\sqrt{\frac{1}{b-a}}$

Question ID : 26433066402
Status : Not Answered
Chosen Option : --

Q.16 If $\left(x - \frac{1}{x}\right)^2 = 12$, what is the value of $\left(x^2 - \frac{1}{x^2}\right)$, given that $x > 0$?

- Ans
- 1. $6\sqrt{2}$
 - 2. $8\sqrt{3}$
 - 3. $6\sqrt{3}$
 - 4. $8\sqrt{2}$

Question ID : 26433061942
Status : Answered
Chosen Option : 2

Q.17 If the average of s numbers is r^4 and the average of r numbers is s^4 , then find the average of all $r + s$ numbers?

- Ans
- 1. $rs (r^2 + s^2 - rs)$
 - 2. rs
 - 3. $r^2 + s^2$
 - 4. $rs (r^2 + s^2)$

Question ID : 26433075344
Status : Answered
Chosen Option : 3

Q.18 A man sells two cows for Rs.15,640 each, gaining 15% on one and losing 15% on the other. Find his total gain or loss.

- Ans
- 1. Rs.720 loss
 - 2. Rs.360 loss
 - 3. Rs.720 gain
 - 4. Rs.360 gain

INDIA

Question ID : 26433065068
Status : Answered
Chosen Option : 2

Q.19 Two persons P and Q can do a job together in 36 days. P is 3 times as efficient as Q. In how many days can Q alone complete the work?

- Ans
- 1. 148
 - 2. 140
 - 3. 144
 - 4. 146

Question ID : 26433074464
Status : Answered
Chosen Option : 3

Q.20 The area of a sector of a circle is 88 sq. cm., and the angle of the sector is 45° . Find the radius of the circle. (Use $\pi = \frac{22}{7}$)

- Ans
- 1. $3\sqrt{11}$ cm
 - 2. $4\sqrt{14}$ cm
 - 3. $6\sqrt{13}$ cm
 - 4. $5\sqrt{14}$ cm

Question ID : 26433063821
Status : Answered
Chosen Option : 2

Q.21 What is the fourth proportional to 7, 15 and 21?

- Ans
- 1. 29
 - 2. 30
 - 3. 48
 - 4. 45

Question ID : 26433065284
Status : Answered
Chosen Option : 4

Q.22 A, B and C can separately do a work in 6, 10 and 15 days respectively. They started to work together but C left after 2 days. In how many days will the remaining work be finished?

- Ans
- 1. $1\frac{2}{4}$
 - 2. $1\frac{1}{4}$
 - 3. $1\frac{5}{8}$
 - 4. $2\frac{7}{4}$



INDIA

Question ID : 26433082726
Status : Answered
Chosen Option : 2

Q.23 $a^3 + b^3 + c^3 = 3abc$ if _____.

- Ans
- 1. $a = b = c$
 - 2. $a + b + c = 0$
 - 3. $a + b + c = 1$
 - 4. $a + b + c = -1$

Question ID : 264330105935
Status : Answered
Chosen Option : 2

Q.24 In how many least number of complete years a sum of money become more than four times of itself at the rate of 50 percent per annum on simple interest?

- Ans
- 1. 9 years
 - 2. 7 years
 - 3. 6 years
 - 4. 5 years

Question ID : 264330105676
Status : Answered
Chosen Option : 3

Q.25 The length of the side of a cube is 1.4 cm. What is the volume of the largest sphere that can be taken out of the cube?

- Ans
- 1. 1.44 cm^3
 - 2. 3.26 cm^3
 - 3. 2.66 cm^3
 - 4. 5.64 cm^3

Question ID : 264330105881
Status : Not Answered
Chosen Option : --

Section : English Comprehension

Q.1 Select the most appropriate meaning of the underlined idiom in the given sentence.

After several years of cheating on his PhD work, the candidate finally had to face the music and lose the opportunity.

- Ans
- 1. Accept ignorance
 - 2. To accept unpleasant consequences
 - 3. Choose another alternative that is uninteresting
 - 4. Be exposed

INDIA

Question ID : 26433072085
Status : Answered
Chosen Option : 4

Q.2 Select the most appropriate option to fill in the blank.

Sunil cannot _____ a trip to the US now because he has already spent a lot for the completion of his house.

- Ans
- 1. visit
 - 2. afford
 - 3. spend
 - 4. earn

Question ID : 26433073793
Status : Answered
Chosen Option : 2

Q.3 Select the most appropriate option that can substitute the underlined segment in the given sentence.

He was not able to adopt himself to the new environment of the hostel.

- Ans
- 1. able to adept himself to
 - 2. able for adopt himself to
 - 3. able to adopt himself with
 - 4. able to adapt himself to

Question ID : 26433084626
Status : Answered
Chosen Option : 4

Q.4 Rearrange the parts of the sentence in correct order.

NFTs are

P. digital collectables that exist on

Q. and are better known for recently

R. taking the art world by storm

S. online ledgers known as blockchains

- Ans
- 1. PSQR
 - 2. RPQS
 - 3. RQPS
 - 4. SPRQ

Question ID : 264330104683
Status : Answered
Chosen Option : 3

Q.5 Choose the incorrectly spelt word.

- Ans
- 1. Flawless
 - 2. Rudimentary
 - 3. Primitive
 - 4. Impracticle

Question ID : 264330104742
Status : Answered
Chosen Option : 3

Q.6 A part of the given sentence which has been underlined may contain a spelling error. Select the option that correctly rectifies the spelling error. If there is no error, select 'No error'.

The police came to the accident spot after receiving an anonymous phone call.

- Ans
- 1. Anonnymous
 - 2. No error
 - 3. Anonymous
 - 4. Anonymaus

Question ID : 26433071786
Status : Answered
Chosen Option : 1

Q.7 Parts of the following sentence have been underlined and given as options. Select the option that contains an error.

I told Rahu on wait for two hours at the bus stop.

- Ans
- 1. at
 - 2. for
 - 3. told
 - 4. on

Question ID : 26433089357
Status : Answered
Chosen Option : 4

Q.8 Select the most appropriate synonym of the underlined word in the given sentence.

The director is at the apex of the managing committee.

- Ans
- 1. Core
 - 2. Bottom
 - 3. Corner
 - 4. Pinnacle

Question ID : 26433071954
Status : Answered
Chosen Option : 4

Q.9 Select the correct indirect form of the given sentence.
"Meena, will you assist me to pack our belongings?" Asked her mother.

- Ans
- 1. Meena's mother asked her whether she will assist her to pack their belongings.
 - 2. Meena's mother asked her whether if she would assist her to pack their belongings.
 - 3. Meena's mother asked her whether she would assist her to pack their belongings.
 - 4. Meena's mother asked her whether she can assist her to pack their belongings.

Question ID : 264330104613
Status : Answered
Chosen Option : 2

Q.10 The following sentence has been divided into parts. One of them may contain an error. Select the part that contains the error from the given options. If you don't find any error, mark 'No error' as your answer.

Huda lived in / the southern part / off Germany.

- Ans
- 1. off Germany
 - 2. the southern part
 - 3. No error
 - 4. Huda lived in

Question ID : 26433084861
Status : Answered
Chosen Option : 2

Q.11 Select the most appropriate ANTONYM of the given word.

Everlasting

- Ans 1. Eternal
 2. Transient
 3. Fatuous
 4. Misled

Question ID : 26433063163
Status : Answered
Chosen Option : 3

Q.12 Select the correct active form of the given sentence.
Our machine is shipped to ten different countries.

- Ans 1. We shipped our machine to ten different countries.
 2. We are shipping our machine to ten different countries.
 3. Someone ship our machine on ten different countries.
 4. We ship our machine to ten different countries.

Question ID : 264330104587
Status : Answered
Chosen Option : 2

Q.13 Select the correct passive form of the given sentence.
The citizens have chosen that man as their leader.

- Ans 1. That man had been chosen by the citizens as their leader.
 2. That man has been chosen by the citizens as their leader.
 3. That man is chosen by the citizens as their leader.
 4. That man was chosen by the citizens as their leader.

Question ID : 264330104563
Status : Answered
Chosen Option : 1

Q.14 Select the word segment that substitutes (replaces) the bracketed word segment correctly and completes the sentence meaningfully.

Neither the teachers (or the principal likes the new budget) cuts.

- Ans 1. either the principal likes the new budget
 2. or the principal like the new budget
 3. nor the principal like the new budget
 4. nor the principal likes the new budget

Question ID : 26433088966
Status : Answered
Chosen Option : 4

Q.15 Select the most appropriate ANTONYM of the word 'ACQUISITION' from the given sentence.

The head coach got surprised with the level of enthusiasm shown by the players as they all were demoralised after the first loss.

- Ans
- 1. Enthusiasm
 - 2. Demoralised
 - 3. Surprised
 - 4. Loss

Question ID : 26433060702
Status : Not Answered
Chosen Option : --

Q.16 Select the most appropriate synonym of the underlined word.

The fraudsters hoodwinked us and took away all our valuables.

- Ans
- 1. Coerced
 - 2. Threatened
 - 3. Misguided
 - 4. Deceived

Question ID : 26433070511
Status : Answered
Chosen Option : 3

Q.17 Select the option that can be used as a one-word substitute for the given group of words.

One who loves humanity or believes in universal brotherhood

- Ans
- 1. Humane
 - 2. Magnanimous
 - 3. Philanthropist
 - 4. Misanthropist

Question ID : 26433072310
Status : Answered
Chosen Option : 3

Q.18 The question below consists of a set of labeled sentences. Out of the four options given, select the most logical order of the sentences to form a coherent paragraph.

P. I had my own crib in the bedroom next to our parent's room.

Q. Annie awoke hungry at 2:30 a.m. each morning.

R. When Annie would cry out, I would climb out of my crib and come running into our parent's room to check on her.

S. For the first few months, Annie slept in a crib by our parents' bed.

- Ans
- 1. PRSQ
 - 2. RPQS
 - 3. QRSP
 - 4. SPQR

Question ID : 264330104721
Status : Answered
Chosen Option : 3

Q.19 A sentence has been given with a blank to be filled with an appropriate word. Choose the correct alternative.
Writing down instructions, steps and remembering them can make you look really efficient and _____.

- Ans 1. diligent
 2. dormant
 3. operable
 4. sluggish

Question ID : 264330104769
Status : Answered
Chosen Option : 1

Q.20 Select the most appropriate meaning of the given idiom.

Lose your marbles

- Ans 1. To go insane
 2. To handle stress
 3. To lower down anger
 4. To be patient

Question ID : 26433060713
Status : Answered
Chosen Option : 1

Comprehension:

In the following passage, some words have been deleted. Read the passage carefully and select the most appropriate option to fill in each blank.

Mob lynching is the act of a group of people murdering a person without due process of law for an (1)_____ infraction. In recent years, mob lynching has become one of the hate (2)_____ that targets persons of a certain identity, members of a minority population, or strangers on the basis of a mere (3)_____. Without obeying any principles of law, the mob takes the law into their own hands to punish the supposed (4)_____ in the name of justice. Mob lynching is a breach of human dignity and a (5)_____ violation of the Universal Declaration of Human Rights, according to Article 21 of the Indian Constitution.

SubQuestion No : 21

Q.21 Select the most appropriate answer to fill in blank 1.

- Ans 1. alleged
 2. advantaged
 3. applied
 4. encouraged

Question ID : 26433084880
Status : Answered
Chosen Option : 1

Comprehension:

In the following passage, some words have been deleted. Read the passage carefully and select the most appropriate option to fill in each blank.

Mob lynching is the act of a group of people murdering a person without due process of law for an (1) _____ infraction. In recent years, mob lynching has become one of the hate (2) _____ that targets persons of a certain identity, members of a minority population, or strangers on the basis of a mere (3) _____. Without obeying any principles of law, the mob takes the law into their own hands to punish the supposed (4) _____ in the name of justice. Mob lynching is a breach of human dignity and a (5) _____ violation of the Universal Declaration of Human Rights, according to Article 21 of the Indian Constitution.

SubQuestion No : 22

Q.22 Select the most appropriate answer to fill in blank 2.

- Ans 1. crimes
 2. gossips
 3. goals
 4. desires

Question ID : 26433084881

Status : Answered

Chosen Option : 4

Comprehension:

In the following passage, some words have been deleted. Read the passage carefully and select the most appropriate option to fill in each blank.

Mob lynching is the act of a group of people murdering a person without due process of law for an (1) _____ infraction. In recent years, mob lynching has become one of the hate (2) _____ that targets persons of a certain identity, members of a minority population, or strangers on the basis of a mere (3) _____. Without obeying any principles of law, the mob takes the law into their own hands to punish the supposed (4) _____ in the name of justice. Mob lynching is a breach of human dignity and a (5) _____ violation of the Universal Declaration of Human Rights, according to Article 21 of the Indian Constitution.

SubQuestion No : 23

Q.23 Select the most appropriate answer to fill in blank 3.

- Ans 1. suspicion
 2. trust
 3. evidence
 4. logic

Question ID : 26433084882

Status : Answered

Chosen Option : 2

Comprehension:

In the following passage, some words have been deleted. Read the passage carefully and select the most appropriate option to fill in each blank.

Mob lynching is the act of a group of people murdering a person without due process of law for an (1) _____ infraction. In recent years, mob lynching has become one of the hate (2) _____ that targets persons of a certain identity, members of a minority population, or strangers on the basis of a mere (3) _____. Without obeying any principles of law, the mob takes the law into their own hands to punish the supposed (4) _____ in the name of justice. Mob lynching is a breach of human dignity and a (5) _____ violation of the Universal Declaration of Human Rights, according to Article 21 of the Indian Constitution.

SubQuestion No : 24

Q.24 Select the most appropriate answer to fill in blank 4.

- Ans
- 1. innocent
 - 2. lawman
 - 3. faultless
 - 4. accused

Question ID : 26433084883

Status : Answered

Chosen Option : 2

Comprehension:

In the following passage, some words have been deleted. Read the passage carefully and select the most appropriate option to fill in each blank.

Mob lynching is the act of a group of people murdering a person without due process of law for an (1) _____ infraction. In recent years, mob lynching has become one of the hate (2) _____ that targets persons of a certain identity, members of a minority population, or strangers on the basis of a mere (3) _____. Without obeying any principles of law, the mob takes the law into their own hands to punish the supposed (4) _____ in the name of justice. Mob lynching is a breach of human dignity and a (5) _____ violation of the Universal Declaration of Human Rights, according to Article 21 of the Indian Constitution.

SubQuestion No : 25

Q.25 Select the most appropriate answer to fill in blank 5.

- Ans
- 1. prevalent
 - 2. convenient
 - 3. covert
 - 4. flagrant

Question ID : 26433084884

Status : Not Answered

Chosen Option : --