

Combined Higher Secondary Level Examination 2021 Tier I

Roll Number	
Candidate Name	
Venue Name	
Exam Date	10/06/2022
Exam Time	12:30 PM - 1:30 PM
Subject	CHSL 2021 Tier I

Section : English Language

Q.1 Select the **INCORRECTLY** spelt word.

Ans 1. Harrass

2. Kinetic

3. Inkling

4. Jocular

Question ID : 26433043060

Status : Answered

Chosen Option : 1

Q.2 The following sentence has been split into four segments. Identify the segment that contains an **INCORRECTLY** spelt word.
The management is not perturbed about appointing / someone who is knowledgeable but is more inclined / towards filling the position with a person / who will be obsequous and will dance to their tunes.

Ans 1. someone who is knowledgeable but is more inclined

2. The management is not perturbed about appointing

3. towards filling the position with a person

4. who will be obsequous and will dance to their tunes

Question ID : 26433045554

Status : Marked For Review

Chosen Option : 2

Q.3 Select the option that expresses the given sentence in passive voice.
The vendor sold the vegetables in the market.

Ans 1. The vegetables are sold by the vendor in the market.

2. The vegetables were being sold by the vendor in the market.

3. The vegetables were sold by the vendor in the market.

4. The vendor had sold the vegetables in the market.

Question ID : 26433039709

Status : Answered

Chosen Option : 3

Q.4 Select the option that can be used as a one-word substitute for the given group of words.

A short text written on tombstone

Ans 1. Celibacy

2. Epitaph

3. Calligraphy

4. Extempore

Question ID : 26433039898

Status : Answered

Chosen Option : 2

Q.5 Sentences of a paragraph are given below in jumbled order. Arrange the sentences in the correct order to form a meaningful and coherent paragraph.

- A. Food blogs are often authored by food aficionados, sometimes known as 'foodies'.
- B. The blogger can benefit from it if he or she uses it professionally.
- C. Food blogging is food journalism that combines an interest in food, blog writing, and food photography.
- D. The greater the popularity of a food blogger, the more options for him/her to monetise his/her work.

- Ans
- 1. DABC
 - 2. CABD
 - 3. BDCA
 - 4. ACBD

Question ID : 26433042887
Status : Answered
Chosen Option : 2

Q.6 Select the most appropriate meaning of the highlighted idiom.
I was like a fish out of water in the new firm.

- Ans
- 1. Nosy yet firm
 - 2. Very adventurous
 - 3. Always comfortable
 - 4. Being uncomfortable and restless

Question ID : 26433045500
Status : Answered
Chosen Option : 4

Q.7 Select the INCORRECTLY spelt word.

- Ans
- 1. Argument
 - 2. Corporation
 - 3. Surreptious
 - 4. Deception

Question ID : 26433040090
Status : Answered
Chosen Option : 3

Q.8 Select the most appropriate option to substitute the underline segment in the given sentence.

Though Mr. Swami ran in debt, he did not stop wasting money.

- Ans
- 1. ran along
 - 2. ran into
 - 3. ran to
 - 4. ran over

Question ID : 26433042812
Status : Answered
Chosen Option : 2

Q.9 Select the most appropriate **ANTONYM** of the word given in bold in the following sentence.

He does well, though he's sometimes contemptuous.

- Ans 1. humble
 2. wealthy
 3. strong
 4. civilised

Question ID : 26433042802

Status : Answered

Chosen Option : 1

Q.10 Complete the sentence with an appropriate **ANTONYM** of the word mentioned in the bracket.

The old house was so _____(sturdy) that it could be shattered into pieces with a single blow.

- Ans 1. feeble
 2. wry
 3. competent
 4. subdued

Question ID : 26433042892

Status : Answered

Chosen Option : 3

Q.11 Select the most appropriate option to fill in the blank.

He ran _____ the field to catch the ball

- Ans 1. across
 2. over
 3. through
 4. besides

INDIA

Question ID : 26433039702

Status : Answered

Chosen Option : 1

Q.12 Select the option that will improve the underlined part of the given sentence.

Though many of my family members can cook well, I can cook more well than others.

- Ans 1. I can cook best than others
 2. I can cook more good than others
 3. I can cook good than others
 4. I can cook better than others

Question ID : 26433043001

Status : Answered

Chosen Option : 4

Q.13 Select the most appropriate meaning of the given idiom.

Hobson's choice

- Ans 1. To choose the best option
 2. To choose the worst option
 3. A choice forced upon someone
 4. A choice that is prejudiced

Question ID : 26433039994

Status : Answered

Chosen Option : 3

Q.14 Select the most appropriate option that can substitute the underlined words in the given sentence.

A strong dislike or fear of people from other countries can never serve the goal of the country's friendly neighbourhood policy.

- Ans
- 1. xerophobia
 - 2. xenophobia
 - 3. arachnophobia
 - 4. cynophobia

Question ID : 26433045439
Status : Answered
Chosen Option : 2

Q.15 Select the most appropriate synonym of the given word.
Pugnacious

- Ans
- 1. Succulent
 - 2. Germane
 - 3. Sagacious
 - 4. Truculent

Question ID : 26433043052
Status : Marked For Review
Chosen Option : 1

Q.16 Select the option that will improve the underlined part of the given sentence.
Shanti heard the children who were shouting outside

- Ans
- 1. who were screaming outdoors
 - 2. who were playing outdoor
 - 3. who were thrashing in the open air
 - 4. who were flaying in the open air

Question ID : 26433045392
Status : Answered
Chosen Option : 2

Q.17 From among the words given in bold, select the INCORRECTLY spelt word in the following sentence.
Reena, who devoured foreign **coloquialism** and **trivia**, successfully diverted the conversation.

- Ans
- 1. devoured
 - 2. successfully
 - 3. coloquialism
 - 4. trivia

Question ID : 26433043170
Status : Answered
Chosen Option : 3

Q.18 Select the option that expresses the given sentence in active voice.
The problem will be solved by my friend.

- Ans 1. My friend was solved the problem.
 2. My friend will be solving the problem.
 3. My friend will solve the problem.
 4. My friend solves the problem.

Question ID : 26433039720
Status : Answered
Chosen Option : 3

Q.19 Select the sentence which has no spelling error.

- Ans 1. Patience is a nesecessary quality for a teacher.
 2. The soil is necessary for plantation.
 3. Water is a necessary element for life.
 4. Sharp observation is naecessary for a detective.

Question ID : 26433043110
Status : Answered
Chosen Option : 2

Q.20 In the following passage, some words have been deleted. Read the passage carefully and select the most appropriate option to fill in each blank.

Wise managers _____ opinions, get information, ask advice, act _____ and know the art of _____ responsibilities to the subordinates.

- Ans 1. condemn, transnationally, elevating
 2. solicit, transparently, delegating
 3. coerce, translucently, relegating
 4. entrust, transiently, accelerating

Question ID : 26433045603
Status : Answered
Chosen Option : 2

Comprehension:

In the following passage, some words have been deleted. Fill in the blanks with the help of the options given. Select the most appropriate option for each blank.

There are (1)_____ ways to empower women. Individual people and the administration must work (2)_____ to make this a (3)_____. Girl's education must be made mandatory so that they do not become (4)_____, uneducated, and unable to support themselves. Women must be (5)_____ equal rights and opportunities in all fields, regardless of their gender.

SubQuestion No : 21

Q.21 Select the most appropriate option to fill in blank No.1.

- Ans 1. selected
 2. several
 3. counted
 4. chosen

Question ID : 26433045695
Status : Answered
Chosen Option : 2

Comprehension:

In the following passage, some words have been deleted. Fill in the blanks with the help of the options given. Select the most appropriate option for each blank.

There are (1)_____ ways to empower women. Individual people and the administration must work (2)_____ to make this a (3)_____. Girl's education must be made mandatory so that they do not become (4)_____, uneducated, and unable to support themselves. Women must be (5)_____ equal rights and opportunities in all fields, regardless of their gender.

SubQuestion No : 22

Q.22 Select the most appropriate option to fill in blank No.2.

- Ans 1. anonymously
 2. cooperatively
 3. singlehandedly
 4. forcefully

Question ID : 26433045696
Status : Answered
Chosen Option : 2

Comprehension:

In the following passage, some words have been deleted. Fill in the blanks with the help of the options given. Select the most appropriate option for each blank.

There are (1)_____ ways to empower women. Individual people and the administration must work (2)_____ to make this a (3)_____. Girl's education must be made mandatory so that they do not become (4)_____, uneducated, and unable to support themselves. Women must be (5)_____ equal rights and opportunities in all fields, regardless of their gender.

SubQuestion No : 23

Q.23 Select the most appropriate option to fill in blank No.3.

- Ans 1. reality
 2. dream
 3. truth
 4. fiction

Question ID : 26433045697
Status : Answered
Chosen Option : 1

Comprehension:

In the following passage, some words have been deleted. Fill in the blanks with the help of the options given. Select the most appropriate option for each blank.

There are (1)_____ ways to empower women. Individual people and the administration must work (2)_____ to make this a (3)_____. Girl's education must be made mandatory so that they do not become (4)_____, uneducated, and unable to support themselves. Women must be (5)_____ equal rights and opportunities in all fields, regardless of their gender.

SubQuestion No : 24

Q.24 Select the most appropriate option to fill in blank No.4.

- Ans 1. ignorant
 2. arrogant
 3. experienced
 4. indifferent

Question ID : 26433045698
Status : Answered
Chosen Option : 1

Comprehension:

In the following passage, some words have been deleted. Fill in the blanks with the help of the options given. Select the most appropriate option for each blank.

There are (1)_____ ways to empower women. Individual people and the administration must work (2)_____ to make this a (3)_____. Girl's education must be made mandatory so that they do not become (4)_____, uneducated, and unable to support themselves. Women must be (5)_____ equal rights and opportunities in all fields, regardless of their gender.

SubQuestion No : 25

Q.25 Select the most appropriate option to fill in blank No.5.

- Ans
- 1. taken
 - 2. accepted
 - 3. satisfied with
 - 4. accorded

Question ID : 26433045699
Status : Answered
Chosen Option : 4

Section : General Intelligence

Q.1 In a certain code language, "CAUTIOUS" is written as "CUAITUOS", and "DEADLINE" is written as "DAELDNIE". How will "ECONOMIC" be written in that language?

- Ans
- 1. ECOONIMC
 - 2. EOCOINMC
 - 3. EEOCNIMC
 - 4. ECONIMC

Question ID : 26433043506
Status : Answered
Chosen Option : 4


Q.2 If 30 July 2015 was Thursday, then what was the day of the week on 03 September 2016?

- Ans
- 1. Friday
 - 2. Thursday
 - 3. Sunday
 - 4. Saturday

Question ID : 26433040680
Status : Answered
Chosen Option : 4

Q.3 Select the correct mirror image of the given combination when the mirror is placed at 'PQ' as shown.


r j 7 3 d k



- Ans
- 1. k b ε ∇ j r
 - 2. k b ε ∇ j r
 - 3. k q ε ∇ j r
 - 4. k d ε ∇ j r

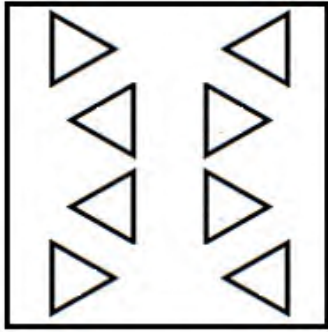
Question ID : 26433045013
Status : Answered
Chosen Option : 1

Q.4 A paper is folded and cut as shown below. How will it appear when unfolded?



Ans

✓ 1.



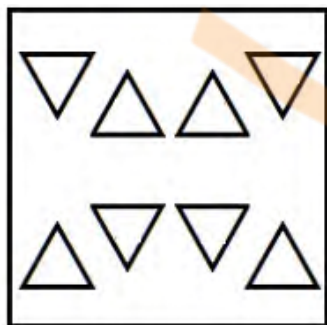
✗ 2.



✗ 3.



✗ 4.



Question ID : 26433045303

Status : Answered

Chosen Option : 1

Q.5 Study the given pattern carefully and select the number that can replace the question mark (?) in it.

First row: 8, 13, 25

Second row: 12, 7, 25

Third row: 9, 15, ?

(NOTE: Operations should be performed on the whole numbers, without breaking down the number into its constituent digits. For example, 13 – Operations on 13 such as adding/deleting/multiplying etc. to 13 can be performed. Breaking down 13 into 1 and 3 and then performing mathematical operations on 1 and 3 is not allowed.)

Ans 1. 36

2. 30

3. 16

4. 49

Question ID : 26433043324

Status : Answered

Chosen Option : 1

Q.6 Select the set in which the numbers are related in the same way as are the numbers of the following set.

(11, 8, 33)

(33, 5, 924)

(NOTE : Operations should be performed on the whole numbers, without breaking down the numbers into its constituent digits. E.g. 13 – Operations on 13 such as adding /deleting /multiplying etc. to 13 can be performed. Breaking down 13 into 1 and 3 and then performing mathematical operations on 1 and 3 is NOT allowed)

Ans 1. (22, 17, 156)

2. (24, 15, 216)

3. (26, 22, 188)

4. (21, 17, 87)

Question ID : 26433043231

Status : Answered

Chosen Option : 2

Q.7 Which letter cluster will replace the question mark(?) to complete the given series?
PUCH, QTDG, RSEF, SRFE, ?.

Ans 1. TQGC

2. GTCA

3. TQGD

4. GDQT

Question ID : 26433040636

Status : Answered

Chosen Option : 3

Q.8 If M denotes '-', N denotes '+', O denotes 'x' and P denotes '+', then what will come in place of '?' in the following equation?
(72 N 9) O 4 M 26 P 97 M (36 N 2) = ?

Ans 1. 90

2. 85

3. 75

4. 80

Question ID : 26433043363

Status : Answered

Chosen Option : 2

Q.9 Which of the following numbers will replace the question mark (?) in the given number series?

7350, 7345, 7345, ?, 7360, 7375

- Ans
- 1. 7360
 - 2. 7335
 - 3. 7350
 - 4. 7340

Question ID : 26433038607

Status : Marked For Review

Chosen Option : 3

Q.10 Select the correct combination of mathematical signs to replace the * signs and to balance the given equation.

$3 * 4 * 2 * 10 * 17 * 2$

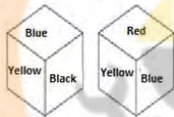
- Ans
- 1. +, +, +, =, -
 - 2. x, x, +, =, x
 - 3. x, +, =, -, -
 - 4. +, +, =, x, -

Question ID : 26433040703

Status : Answered

Chosen Option : 2

Q.11 Two different positions of the same dice are shown, the six faces of which are coloured Red, Green, Blue, Yellow, Black, White. Select the colour that will be on the face opposite to the one coloured Black.



- Ans
- 1. Blue
 - 2. Red
 - 3. Green
 - 4. White

Question ID : 26433040189

Status : Answered

Chosen Option : 2

Q.12 Study the given pattern carefully and select the number that can replace the question mark (?) in it.

First row: 162, 91, 71

Second row: 218, 126, 92

Third row: 194, 79, ?

(NOTE: Operations should be performed on the whole numbers, without breaking down the number into its constituent digits. For example, 13 – Operations on 13 such as adding/deleting/multiplying etc. to 13 can be performed. Breaking down 13 into 1 and 3 and then performing mathematical operations on 1 and 3 is not allowed.)

- Ans
- 1. 122
 - 2. 125
 - 3. 115
 - 4. 109

Question ID : 26433043317

Status : Answered

Chosen Option : 3

Q.13 Select the correct combination of mathematical signs to replace the * signs and to balance the given equation.

$$46*16*4*21*72*4*57$$

- Ans
- 1. +, =, -, x, -, +
 - 2. -, +, x, =, -, +
 - 3. =, x, +, +, +, -
 - 4. +, =, -, x, -, +

Question ID : 26433040251

Status : Answered

Chosen Option : 3

Q.14 If 15 August 1947 was Friday, then what was the day of the week on 26 January 1950?

- Ans
- 1. Saturday
 - 2. Friday
 - 3. Sunday
 - 4. Thursday


Question ID : 26433040677

Status : Answered

Chosen Option : 4

Q.15 Which letter-cluster will replace the question mark (?) to complete the given series?
TCID, YJRO, ?, IXJK, NESV

- Ans
- 1. ANRH
 - 2. QUDS
 - 3. ZKEW
 - 4. DQAZ



Question ID : 26433044973

Status : Answered

Chosen Option : 4

Q.16 Three Statements are given followed by Three conclusions numbered I, II and III. Assuming the statements to be true, even if they seem to be at variance with commonly known facts, decide which of the conclusions logically follow(s) from the statements.

Statements:

All stones are bricks.

No cement is a brick.

Some marbles are stones.

Conclusions:

I. Some bricks are marbles.

II. Some cements are stones.

III. No marble is a brick.

- Ans
- 1. Only conclusion I follows.
 - 2. Both conclusions I and III follow.
 - 3. Both conclusions I and II follow.
 - 4. Only conclusion II follows.

Question ID : 26433043207

Status : Answered

Chosen Option : 1

Q.17 In a certain code language, 'FAMOUS' is coded as '19 21 15 13 1 6', and 'GARDEN' is coded as '14 5 4 18 1 7'. How will 'LEADER' be coded in that language?

- Ans
- 1. 18 4 5 1 6 12
 - 2. 16 4 5 1 2 15
 - 3. 18 5 4 1 5 12
 - 4. 17 5 4 1 8 14

Question ID : 26433039304
Status : Answered
Chosen Option : 3


Q.18 Which of the following numbers will replace the question mark (?) in the given series?
558, 570, 555, ?, 552, 576

- Ans
- 1. 571
 - 2. 572
 - 3. 573
 - 4. 574

Question ID : 26433040588
Status : Answered
Chosen Option : 3

Q.19 Select the option that is related to the fifth term in the same way as the second term is related to the first term and fourth term related to third term.
27 : 196 :: 19 : 100 :: 17 : ?

- Ans
- 1. 57
 - 2. 81
 - 3. 96
 - 4. 89



INDIA

Question ID : 26433043553
Status : Answered
Chosen Option : 2

Q.20 Which of the following numbers will replace the question mark (?) in the given series?
14, 18, 54, 58, 174, 178, ?

- Ans
- 1. 534
 - 2. 712
 - 3. 634
 - 4. 522

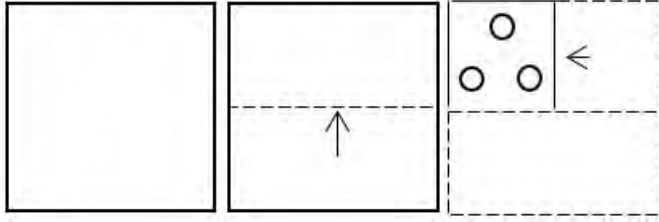
Question ID : 26433043264
Status : Answered
Chosen Option : 1

Q.21 Select the option that is related to the fifth term in the same way as the second term is related to the first term and the fourth term is related to the third term.
REASON : ROSAEN :: SOCIAL : SAICOL :: TRAVEL : ?

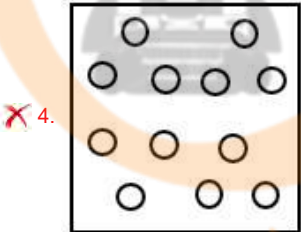
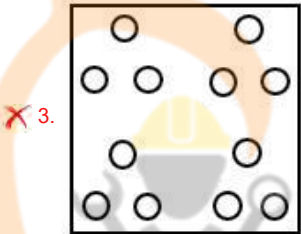
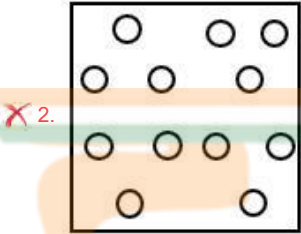
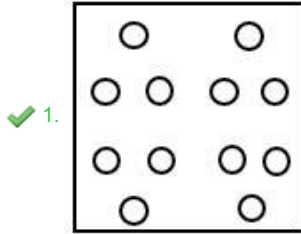
- Ans
- 1. TERLAR
 - 2. TEVARL
 - 3. TEVRAL
 - 4. TEVALR

Question ID : 26433040262
Status : Answered
Chosen Option : 2

Q.22 A paper is folded and cut as shown. How will it appear when unfolded?



Ans



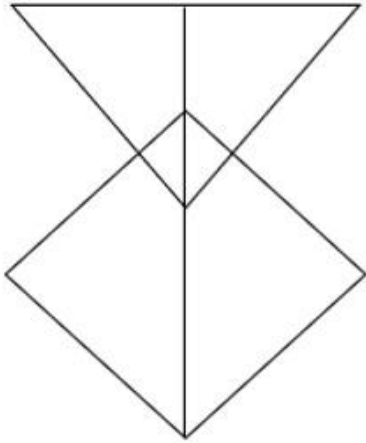
Question ID : 26433040505

Status : Answered

Chosen Option : 1

Q.23

How many triangles are there in the given figure?



Ans 1. 10

2. 7

3. 8

4. 11

Question ID : 26433039043

Status : Answered

Chosen Option : 2

Q.24 In a certain code language, 'SCREEN' is written as '14e5r3s' and 'SHOT' is written as '20o8s'. How will 'CODE' be written in that language?

Ans 1. 5e15c

2. 5d156

3. 5d15c

4. 5d19c

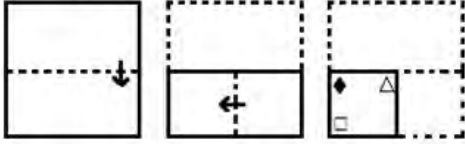
INDIA

Question ID : 26433043418

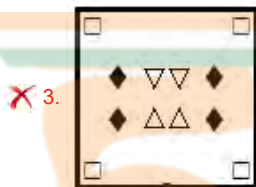
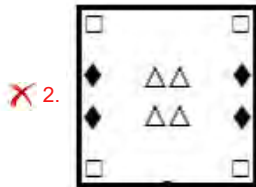
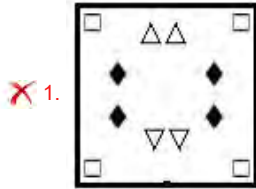
Status : Answered

Chosen Option : 3

Q.25 A paper is folded and cut as shown below. How will it appear when unfolded?



Ans



Question ID : 26433045192

Status : Answered

Chosen Option : 4

Section : Quantitative Aptitude

Q.1 Simplify the following expression.

$$\frac{(62 \times 62 \times 62) - 3(62 \times 62 \times 22) + 3(62 \times 22 \times 22) - (22 \times 22 \times 22)}{8 \times 8 \times 8}$$

- Ans
- ✗ 1. 225
 - ✗ 2. 1250
 - ✓ 3. 125
 - ✗ 4. 25

Question ID : 26433041409

Status : Answered

Chosen Option : 3

Q.2 The base of a parallelogram is twice as long as its corresponding height. If the area of the parallelogram is 144 cm^2 , find the mentioned height.

- Ans
- 1. $2\sqrt{2}$ cm
 - 2. $6\sqrt{2}$ cm
 - 3. $3\sqrt{2}$ cm
 - 4. $8\sqrt{2}$ cm

Question ID : 26433042527
Status : Answered
Chosen Option : 2

Q.3 What is the mean proportional between 64 and 4096?

- Ans
- 1. 512
 - 2. 192
 - 3. 128
 - 4. 8

Question ID : 26433038689
Status : Answered
Chosen Option : 1

Q.4 A and B together can finish a job in 40 days. A can do the same job on her own in 60 days. How long will B take to do the three-fourth of the same work all alone?

- Ans
- 1. 90 days
 - 2. 100 days
 - 3. 80 days
 - 4. 120 days

Question ID : 26433038631
Status : Answered
Chosen Option : 1

Q.5 A sum of ₹5,000 was deposited for 3 years at 10% per annum, compounded annually. The difference between the interest for 2 years and that for 3 years is:

- Ans
- 1. ₹560
 - 2. ₹506
 - 3. ₹650
 - 4. ₹605

Question ID : 26433041430
Status : Answered
Chosen Option : 4

- Q.6 दिए गए बार-चार्ट का अध्ययन कीजिये और नीचे दिए गए प्रश्न का उत्तर दीजिए।
 बार चार्ट 2011 से 2015 के दौरान कारों के उत्पादन (production) और बिक्री (sales) (हजारों में) को दर्शाता है।



2015 में बिक्री का प्रतिशत उत्पादन से कितना अधिक है?

- Ans
- 1. 35
 - 2. 30
 - 3. 25
 - 4. 20

Question ID : 26433044053

Status : Not Attempted and Marked For Review

Chosen Option : --

- Q.7 If $\cot\theta = \cot 30^\circ \cot 60^\circ$ and θ is an acute angle, then 2θ is equal to:

- Ans
- 1. 90°
 - 2. 60°
 - 3. 45°
 - 4. 30°

INDIA

Question ID : 26433039200

Status : Answered

Chosen Option : 1

- Q.8 A shopkeeper mixes three types of rice costing ₹50 per kg, ₹60 per kg and ₹75 per kg in the ratio of 3 : 1 : 2. The average cost of the mixture per kg is:

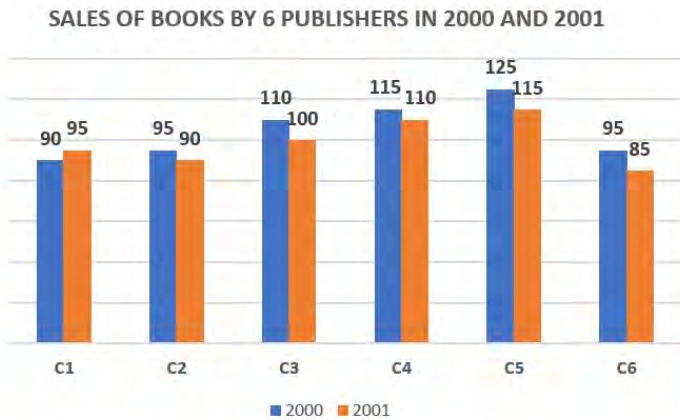
- Ans
- 1. ₹75
 - 2. ₹65
 - 3. ₹50
 - 4. ₹60

Question ID : 26433039275

Status : Answered

Chosen Option : 4

Q.9 The following bar graph shows the sales (in thousands) of books from six different branches of a publishing company in 2000 and 2001.



Answer the following question based on the bar graph:

What is the ratio of the total sales of C3 for both years to the total sales of C4 for both years?

Ans ✓ 1. 14 : 15

✗ 2. 12 : 13

✗ 3. 13 : 14

✗ 4. 15 : 14

Question ID : 26433045954
Status : Answered
Chosen Option : 1

Q.10 If $x + 2y = 10$ and $2xy = 9$, then one of the value of $x - 2y$ is:

Ans ✓ 1. 8

✗ 2. 6

✗ 3. 10

✗ 4. 12

Question ID : 26433041350
Status : Answered
Chosen Option : 1

Q.11 One single discount which is equivalent to 20%, 10% and 5% is given by:

Ans ✗ 1. 32.60%

✗ 2. 32.80%

✗ 3. 30.60%

✓ 4. 31.60%

Question ID : 26433044215
Status : Answered
Chosen Option : 4

Q.12 P sold an item to Q at a 20% gain, and Q sold it to R at a loss of 10%. If R bought the item for ₹1,080, then at what price did P purchase it?

- Ans
- 1. ₹5000
 - 2. ₹3000
 - 3. ₹1000
 - 4. ₹800

Question ID : 26433044093
Status : Answered
Chosen Option : 3

Q.13 A householder spent his monthly salary of ₹7,200 on different items. If he spent ₹4,000 on food and ₹400 on education, then the central angles respectively are:

- Ans
- 1. $200^\circ, 20^\circ$
 - 2. $50^\circ, 200^\circ$
 - 3. $200^\circ, 60^\circ$
 - 4. $30^\circ, 60^\circ$

Question ID : 26433039217
Status : Answered
Chosen Option : 1

Q.14 Rice worth ₹96 per kg and ₹104 per kg are mixed with a third variety in the ratio 1 : 1 : 2. If the mixture is worth ₹113 per kg, the price of the third variety of rice per kg will be:

- Ans
- 1. ₹109
 - 2. ₹126
 - 3. ₹117
 - 4. ₹128

Question ID : 26433039339
Status : Answered
Chosen Option : 2

Q.15 Successive discounts of 10% and 20% are given on the purchase of a purse . If the price of the purse is ₹2,250, find the selling price.

- Ans
- 1. ₹1,520
 - 2. ₹1,290
 - 3. ₹1,320
 - 4. ₹1,620

Question ID : 26433042515
Status : Answered
Chosen Option : 4

Q.16 What is the surface area of a sphere whose diameter is 30 cm? [Use $\pi = 3.14$.]

- Ans
- 1. 1134
 - 2. 2826
 - 3. 1413
 - 4. 1130

Question ID : 26433044174
Status : Answered
Chosen Option : 2

Q.17 Find the compound interest on ₹5,50,000 at 7% per annum for 2 years, compounded annually.

- Ans
- 1. ₹80,605
 - 2. ₹62,695
 - 3. ₹79,690
 - 4. ₹79,695

Question ID : 26433038698
Status : Answered
Chosen Option : 4

Q.18 What is the smallest natural number that should be added to 54321 so that the sum is divisible by 6?

- Ans
- 1. 5
 - 2. 1
 - 3. 7
 - 4. 3

Question ID : 26433038612
Status : Answered
Chosen Option : 4

Q.19 How many spherical balls of radius 5 cm can be made by melting a spherical clay ball having a radius of 15 cm?

- Ans
- 1. 18
 - 2. 3
 - 3. 9
 - 4. 27



Question ID : 26433042455
Status : Answered
Chosen Option : 4

Q.20 The average monthly expenditure of a family for the first four months is ₹13,750, for the next three months is ₹11,750 and for the last five months is ₹31,750. If the family saves ₹15,550 during the whole year, find the average monthly income of the family during the year. (Consider integral part only)

- Ans
- 1. ₹21,055
 - 2. ₹22,045
 - 3. ₹23,040
 - 4. ₹22,000

Question ID : 26433042609
Status : Answered
Chosen Option : 2

Q.21 What is the value of $12 - 8 \div 2 - \{16 \text{ of } -2 + 3 \times 5 - 4\}$?

- Ans
- 1. 0
 - 2. 1
 - 3. 29
 - 4. 45

Question ID : 26433044337
Status : Answered
Chosen Option : 3

Q.22 'A' and 'B' are two stations 494 km apart. A train starts from station 'A' at 3 p.m. and travels towards station 'B' at 83 km/h. Another train starts from station 'B' at 4 p.m. and travels towards station 'A' at 54 km/h. At what time do they meet?

- Ans 1. 7 p.m.
 2. 7 a.m.
 3. 8 p.m.
 4. 9 a.m.

Question ID : 26433038709
Status : Answered
Chosen Option : 1

Q.23 One of the angles of a triangle is 108° , and the other two angles are equal. What is the measure of each of these equal angles?

- Ans 1. 36°
 2. 72°
 3. 78°
 4. 39°

Question ID : 26433039547
Status : Answered
Chosen Option : 1

Q.24 For what value(s) of k will the expression $p + \frac{1}{9}\sqrt{p} + k^2$ be a perfect square?

- Ans 1. $k = \pm \frac{1}{8}$
 2. $k = \pm \frac{1}{9}$
 3. $k = \pm \frac{1}{21}$
 4. $k = \pm \frac{1}{18}$

Question ID : 26433039213
Status : Answered
Chosen Option : 4

Q.25 In a panchayat election Candidate A secured 30% of the total votes and did NOT qualify by 6 votes. Candidate B secured 40% of the total votes and got 6 votes more than the bare minimum to qualify. The total number of votes were _____.

- Ans 1. 140
 2. 160
 3. 100
 4. 120

Question ID : 26433042608
Status : Answered
Chosen Option : 4

Q.1 Which of the following Tiger Reserves/ National Parks and states situated in is INCORRECTLY matched?

- Ans
- 1. Manas Tiger Reserve – Assam
 - 2. Bandhavgarh National Park – Madhya Pradesh
 - 3. Sundarbans National Park – Odisha
 - 4. Corbett National Park – Uttarakhand

Question ID : 26433041899
Status : Answered
Chosen Option : 3

Q.2 Yamini Krishnamurthy was honoured with the _____ in 1977.

- Ans
- 1. Padma Shri
 - 2. Kabir Samman
 - 3. Sangeet Natak Akademi Award
 - 4. Kalidas Samman

Question ID : 26433038814
Status : Not Answered
Chosen Option : --

Q.3 Which of the following countries never organised Olympic games?

- Ans
- 1. South Africa
 - 2. Australia
 - 3. Japan
 - 4. China

Question ID : 26433044498
Status : Answered
Chosen Option : 1

Q.4 Who among the following does NOT belong to Rampur Sahaswan Gharana?

- Ans
- 1. Ustad Rashid Khan
 - 2. Ghulam Mustafa Khan
 - 3. Ustad Fateh Ali Khan
 - 4. Ustad Inayat Khan

Question ID : 26433041942
Status : Not Answered
Chosen Option : --

Q.5 Which of the following minerals is NOT found in rivers (alluvial placers) and on the coast, especially beaches (beach placers)?

- Ans
- 1. Tin
 - 2. Bauxite
 - 3. Platinum
 - 4. Gold

Question ID : 26433044879
Status : Not Answered
Chosen Option : --

Q.6 Who among the followings was an Indian singer of the Khayal genre of Hindustani classical music from Karnataka?

- Ans 1. Gangubai Hangal
 2. Pandit Ravi Shankar
 3. Begum Akhtar
 4. Durga Jasraj

Question ID : 26433038765
Status : Not Answered
Chosen Option : --

Q.7 L Bino Devi, Sangeet Natak Akademi Award winner had received the award for his contribution to which of the following dances forms?

- Ans 1. Kuchipudi
 2. Odissi
 3. Manipuri
 4. Sattriya

Question ID : 26433041785
Status : Not Answered
Chosen Option : --

Q.8 Which of the following is a correct pair?

- Ans 1. Vijay Kumar Singh – Courage and Conviction
 2. K Natwar Singh – Straight from the Heart
 3. Khushwant Singh – Living Shadows
 4. LK Advani – Matters of Discretion

Question ID : 26433041908
Status : Not Answered
Chosen Option : --

Q.9 In May 2021, the Ministry of Tribal Affairs (MTA) signed an MOU with which organisation to support the digital transformation of tribal schools?

- Ans 1. Microsoft
 2. WIPRO
 3. Infosys
 4. Tata Consultancy Services (TCS)

Question ID : 26433041831
Status : Answered
Chosen Option : 1

Q.10 In 1879, who observed cell division in salamander embryos, where cells divide at fixed intervals?

- Ans 1. Albert von Kolliker
 2. Garth L Nicolson
 3. Walther Flemming
 4. Edwin Gorter

Question ID : 26433044760
Status : Not Answered
Chosen Option : --

Q.11 Who among the following is the author of the novel "Mrignayani"?

- Ans
- 1. Chatursen Shashtri
 - 2. Sumitranandan Pant
 - 3. Rangeya Raghav
 - 4. Vrindavan Lal Verma

Question ID : 26433038819
Status : Not Answered
Chosen Option : --

Q.12 In 1976, Natya Tarangini, was founded in the National Capital Region, by world renowned Kuchipudi Dance duo _____.

- Ans
- 1. Seetha Nagajothy and P Nagajothy
 - 2. Pasumarthy Vithal and Bharati
 - 3. Radha and Raja Reddy
 - 4. Jayarama Rao and Vanashri Rao

Question ID : 26433044615
Status : Not Answered
Chosen Option : --

Q.13 Which Article of the Indian Constitution deals with the election of the Vice-President?

- Ans
- 1. Article 66
 - 2. Article 68
 - 3. Article 64
 - 4. Article 62

Question ID : 26433039635
Status : Answered
Chosen Option : 3

Q.14 The body of animals of the phylum Protozoa, such as Paramecium, Amoeba, Euglena, shows _____ grade organisation.

- Ans
- 1. tissue-organ
 - 2. protoplasmic
 - 3. cell-tissue
 - 4. cellular

Question ID : 26433044827
Status : Not Answered
Chosen Option : --

Q.15 According to Mendeleev's periodic table, which unknown element of group III had an atomic mass of 68 that was later replaced by gallium?

- Ans
- 1. Eka-manganese
 - 2. Eka-silicon
 - 3. Eka-aluminium
 - 4. Eka-boron

Question ID : 26433044723
Status : Not Answered
Chosen Option : --

@Qmaths

Q.16 Which of the following equipment is used in throwing events?

- Ans
- 1. Iron rod
 - 2. Indian club
 - 3. Shot
 - 4. Iron ring

Question ID : 26433042203
Status : Answered
Chosen Option : 3

Q.17 Which of the following is an objective of the Government Budget?

- (A) GDP growth
(B) Reallocation of resources
(C) Balanced regional growth

- Ans
- 1. A and C
 - 2. A and B
 - 3. Only A
 - 4. A, B and C

Question ID : 26433044533
Status : Answered
Chosen Option : 4

Q.18 Which of the following vocalists of Calcutta was the first artist of the sub-continent to record on the gramophone commercially in November 1902?

- Ans
- 1. Suchitra Mitra
 - 2. Gauhar Jaan
 - 3. Sandhya Mukhopadhyay
 - 4. Lata Mangeshkar

Question ID : 26433042329
Status : Not Answered
Chosen Option : --

Q.19 Which of the following personalities have NOT been nominated for a Grammy Award?

- Ans
- 1. Lata Mangeshkar
 - 2. Pt Vishwa Mohan Bhatt
 - 3. T H Vinayakram
 - 4. A R Rahman

Question ID : 26433041717
Status : Marked For Review
Chosen Option : 2

Q.20 In 1674, who used a single-lens microscope to examine pond water and observed dozens of protists, which he called 'animalcules', as well as spirogyra, or green algae?

- Ans
- 1. Robert Brown
 - 2. Robert Hooke
 - 3. Rudolph Virchow
 - 4. Anton Van Leeuwenhoek

Question ID : 26433044751
Status : Not Answered
Chosen Option : --

Q.21 Ramali Bin Ibrahim, a Malaysian choreographer of Bharatanatyam and Odissi dance forms of India, received the Padma Shri in which of the following years?

Ans 1. 2018

2. 2020

3. 2008

4. 2014

Question ID : 26433042350

Status : Not Answered

Chosen Option : --

Q.22 Pradhan Mantri Garib Kalyan Package (PMGKP) Insurance Scheme was extended by the Central government in June 2021. This provides that the families of health workers would get _____ lakh compensation in case of personal accidents.

Ans 1. ₹50

2. ₹25

3. ₹45

4. ₹30

Question ID : 26433044394

Status : Marked For Review

Chosen Option : 2

Q.23 Why does the effective nuclear charge experienced by valence electrons decrease down the group?

Ans 1. The elements are inert

2. The outermost electrons are closest to the nucleus

3. The innermost electrons are farther away from the nucleus

4. The outermost electrons are farther away from the nucleus

Question ID : 26433039417

Status : Marked For Review

Chosen Option : 4

Q.24 In October 2021, 'Operation Sajag', a measure to reduce crime in society, was launched in which state/Union Territory?

Ans 1. Bihar

2. Delhi

3. Uttar Pradesh

4. Haryana

Question ID : 26433041822

Status : Marked For Review

Chosen Option : 3

Q.25 Who among the following is the author of 'A Movable Feast'?

Ans 1. Ernest Hemingway

2. William Faulkner

3. George Orwell

4. Roald Dahl

Question ID : 26433044665

Status : Not Answered

Chosen Option : --